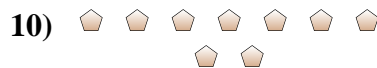
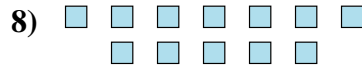
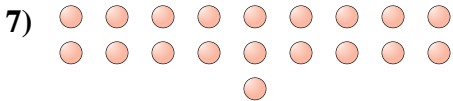
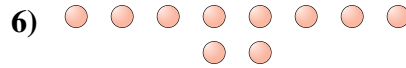

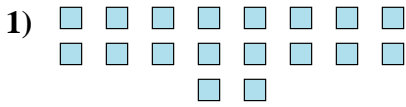




Determina se il numero delle figure all'interno di ogni rettangolo è pari o dispari.

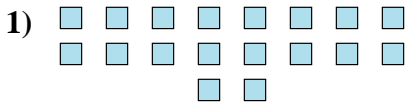


Risposte


1. _____
2. _____
3. _____
4. _____
5. _____
6. _____
7. _____
8. _____
9. _____
10. _____



Determina se il numero delle figure all'interno di ogni rettangolo è pari o dispari.



18



20



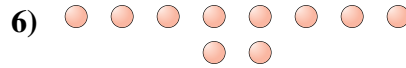
14



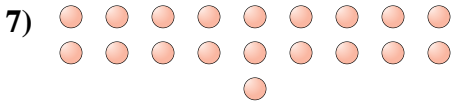
10



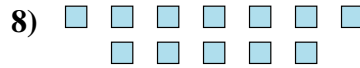
12



10



19



12



7



9

Risposte

1. Pari

2. Pari

3. Pari

4. Pari

5. Pari

6. Pari

7. Dispari

8. Pari

9. Dispari

10. Dispari