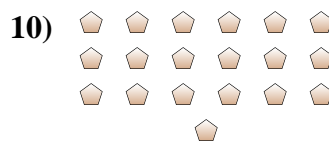
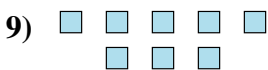
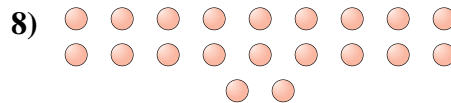
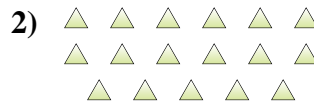
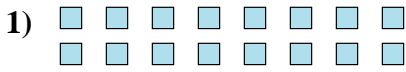




Determina se il numero delle figure all'interno di ogni rettangolo è pari o dispari.



**Risposte**

1. \_\_\_\_\_

2. \_\_\_\_\_

3. \_\_\_\_\_

4. \_\_\_\_\_

5. \_\_\_\_\_

6. \_\_\_\_\_

7. \_\_\_\_\_

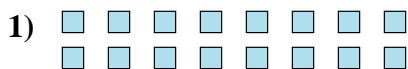
8. \_\_\_\_\_

9. \_\_\_\_\_

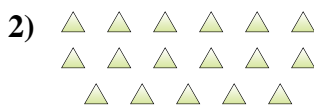
10. \_\_\_\_\_



Determina se il numero delle figure all'interno di ogni rettangolo è pari o dispari.



16



17



5



6



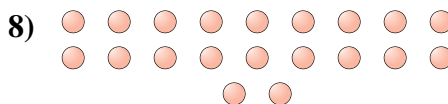
13



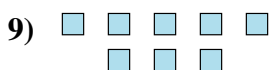
15



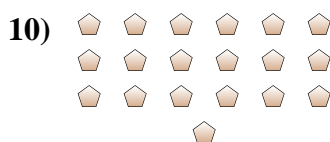
8



20



8



19

**Risposte**

1. Pari

2. Dispari

3. Dispari

4. Pari

5. Dispari

6. Dispari

7. Pari

8. Pari

9. Pari

10. Dispari