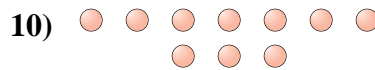
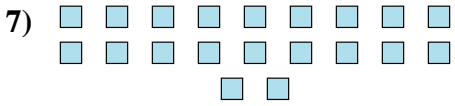
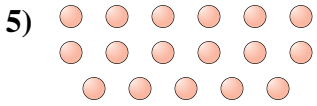
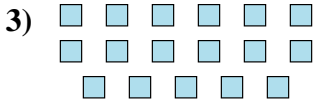
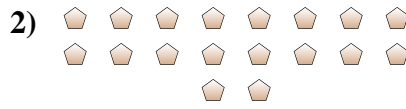




Determina se il numero delle figure all'interno di ogni rettangolo è pari o dispari.



**Risposte**

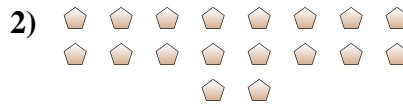
1. \_\_\_\_\_
2. \_\_\_\_\_
3. \_\_\_\_\_
4. \_\_\_\_\_
5. \_\_\_\_\_
6. \_\_\_\_\_
7. \_\_\_\_\_
8. \_\_\_\_\_
9. \_\_\_\_\_
10. \_\_\_\_\_



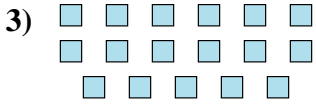
Determina se il numero delle figure all'interno di ogni rettangolo è pari o dispari.



19



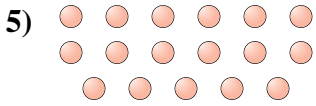
18



17



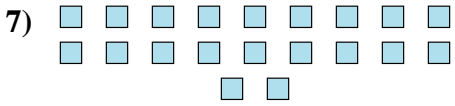
15



17



13



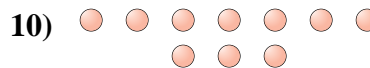
20



7



6



10

**Risposte**

1. **Dispari**

2. **Pari**

3. **Dispari**

4. **Dispari**

5. **Dispari**

6. **Dispari**

7. **Pari**

8. **Dispari**

9. **Pari**

10. **Pari**