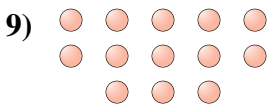

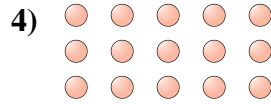




Determina se il numero delle figure all'interno di ogni rettangolo è pari o dispari.

**Risposte**



- 1. \_\_\_\_\_
- 2. \_\_\_\_\_
- 3. \_\_\_\_\_
- 4. \_\_\_\_\_
- 5. \_\_\_\_\_
- 6. \_\_\_\_\_
- 7. \_\_\_\_\_
- 8. \_\_\_\_\_
- 9. \_\_\_\_\_
- 10. \_\_\_\_\_



Determina se il numero delle figure all'interno di ogni rettangolo è pari o dispari.



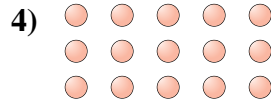
6




14



10



15



17



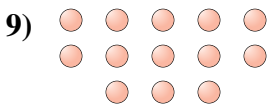
7



13



10



13



8

**Risposte**

1. **Pari**

2. **Pari**

3. **Pari**

4. **Dispari**

5. **Dispari**

6. **Dispari**

7. **Dispari**

8. **Pari**

9. **Dispari**

10. **Pari**