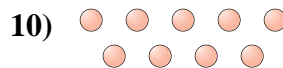
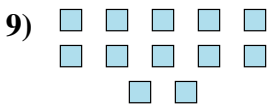

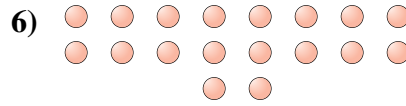

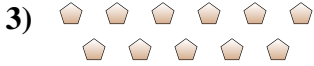
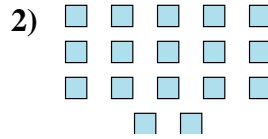
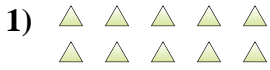




Determina se il numero delle figure all'interno di ogni rettangolo è pari o dispari.

**Risposte**



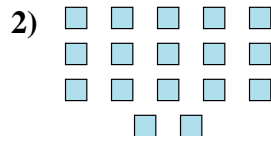
- 1. \_\_\_\_\_
- 2. \_\_\_\_\_
- 3. \_\_\_\_\_
- 4. \_\_\_\_\_
- 5. \_\_\_\_\_
- 6. \_\_\_\_\_
- 7. \_\_\_\_\_
- 8. \_\_\_\_\_
- 9. \_\_\_\_\_
- 10. \_\_\_\_\_



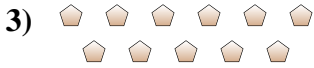
Determina se il numero delle figure all'interno di ogni rettangolo è pari o dispari.




10



17



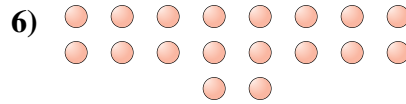
11




19



14



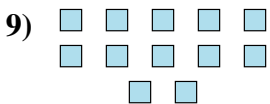
18



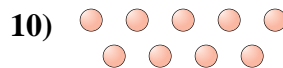
18



8



12



9

**Risposte**

1. Pari

2. Dispari

3. Dispari

4. Dispari

5. Pari

6. Pari

7. Pari

8. Pari

9. Pari

10. Dispari