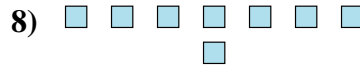
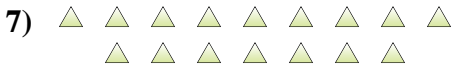
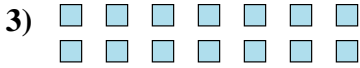
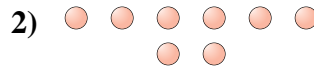
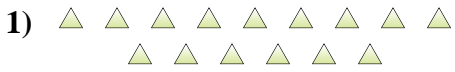




Determina se il numero delle figure all'interno di ogni rettangolo è pari o dispari.

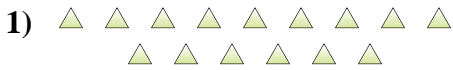


**Risposte**

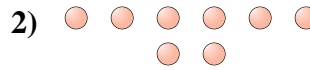
1. \_\_\_\_\_
2. \_\_\_\_\_
3. \_\_\_\_\_
4. \_\_\_\_\_
5. \_\_\_\_\_
6. \_\_\_\_\_
7. \_\_\_\_\_
8. \_\_\_\_\_
9. \_\_\_\_\_
10. \_\_\_\_\_



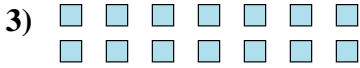
Determina se il numero delle figure all'interno di ogni rettangolo è pari o dispari.



15



8



14



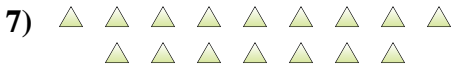
10



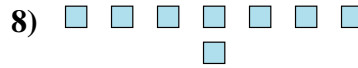
12



8



16



8



11



7

**Risposte**

1. **Dispari**

2. **Pari**

3. **Pari**

4. **Pari**

5. **Pari**

6. **Pari**

7. **Pari**

8. **Pari**

9. **Dispari**

10. **Dispari**