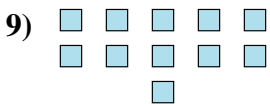
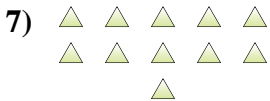
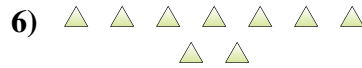
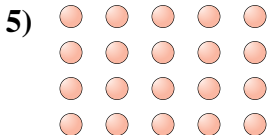
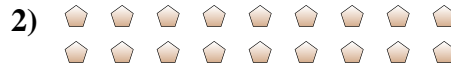




Determina se il numero delle figure all'interno di ogni rettangolo è pari o dispari.



**Risposte**

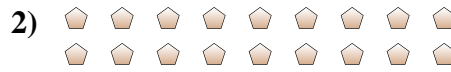
- 1. \_\_\_\_\_
- 2. \_\_\_\_\_
- 3. \_\_\_\_\_
- 4. \_\_\_\_\_
- 5. \_\_\_\_\_
- 6. \_\_\_\_\_
- 7. \_\_\_\_\_
- 8. \_\_\_\_\_
- 9. \_\_\_\_\_
- 10. \_\_\_\_\_



Determina se il numero delle figure all'interno di ogni rettangolo è pari o dispari.



7



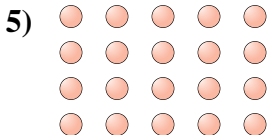
18



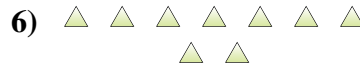
6



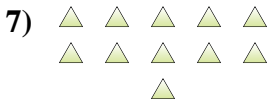
7



20



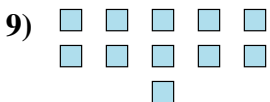
9



11



5



11



6

**Risposte**

1. **Dispari**

2. **Pari**

3. **Pari**

4. **Dispari**

5. **Pari**

6. **Dispari**

7. **Dispari**

8. **Dispari**

9. **Dispari**

10. **Pari**