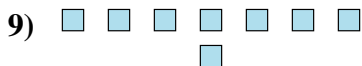
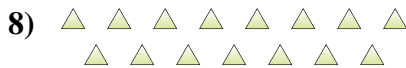
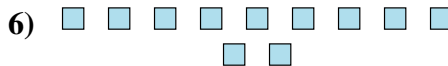
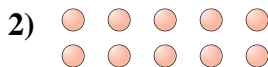





Determina se il numero delle figure all'interno di ogni rettangolo è pari o dispari.




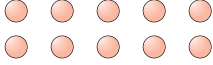
Risposte


- 1. _____
- 2. _____
- 3. _____
- 4. _____
- 5. _____
- 6. _____
- 7. _____
- 8. _____
- 9. _____
- 10. _____



Determina se il numero delle figure all'interno di ogni rettangolo è pari o dispari.

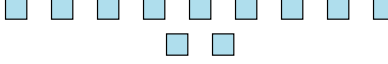
1) 
18

2) 
10

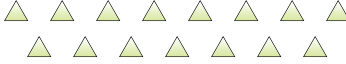
3) 
6

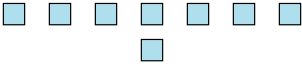
4) 
13


5) 
6

6) 
11

7) 
12

8) 
15

9) 
8

10) 
16

Risposte

1. Pari

2. Pari

3. Pari

4. Dispari

5. Pari

6. Dispari

7. Pari

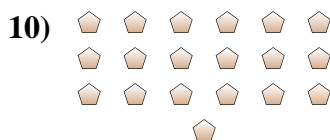
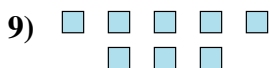
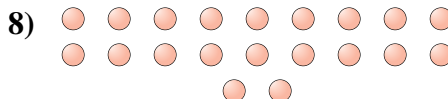
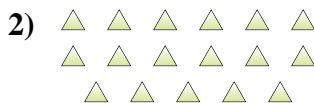
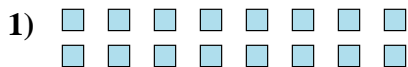
8. Dispari

9. Pari

10. Pari



Determina se il numero delle figure all'interno di ogni rettangolo è pari o dispari.

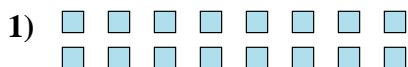


Risposte

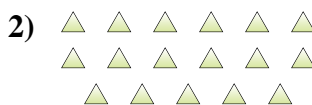
- 1. _____
- 2. _____
- 3. _____
- 4. _____
- 5. _____
- 6. _____
- 7. _____
- 8. _____
- 9. _____
- 10. _____



Determina se il numero delle figure all'interno di ogni rettangolo è pari o dispari.



16



17



5



6



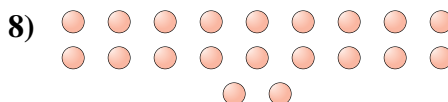
13



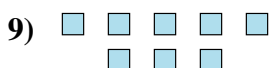
15



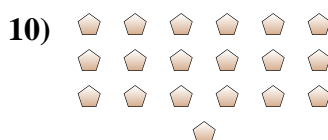
8



20



8



19

Risposte

1. Pari

2. Dispari

3. Dispari

4. Pari

5. Dispari

6. Dispari

7. Pari


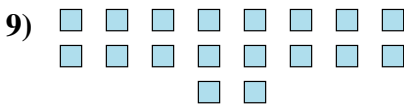
8. Pari

9. Pari

10. Dispari



Determina se il numero delle figure all'interno di ogni rettangolo è pari o dispari.



Risposte

1. _____
2. _____
3. _____
4. _____
5. _____
6. _____
7. _____
8. _____
9. _____
10. _____



Determina se il numero delle figure all'interno di ogni rettangolo è pari o dispari.



5



12



6



8



5



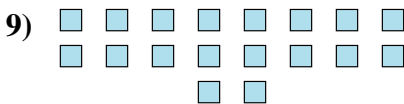
5




5



9



18



17

Risposte

1. **Dispari**

2. **Pari**

3. **Pari**

4. **Pari**

5. **Dispari**

6. **Dispari**

7. **Dispari**

8. **Dispari**

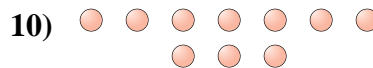
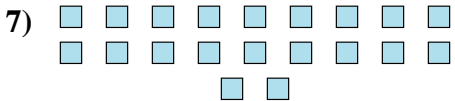
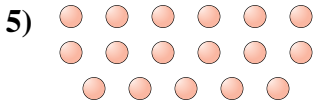
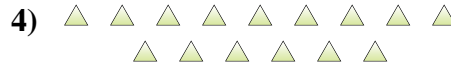
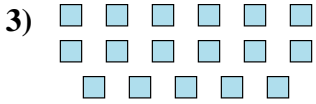
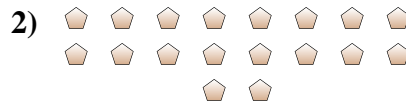
9. **Pari**

10. **Dispari**



Determina se il numero delle figure all'interno di ogni rettangolo è pari o dispari.

Risposte

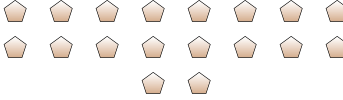


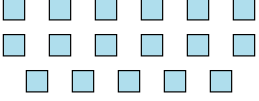
1. _____
2. _____
3. _____
4. _____
5. _____
6. _____
7. _____
8. _____
9. _____
10. _____




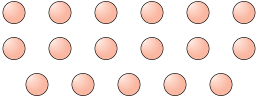
Determina se il numero delle figure all'interno di ogni rettangolo è pari o dispari.


1) 
 19

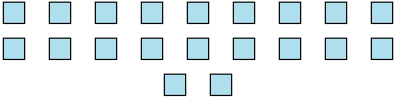
2) 
 18

3) 
 17

4) 
 15

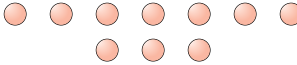
5) 
 17

6) 
 13

7) 
 20

8) 
 7

9) 
 6

10) 
 10

Risposte

1. **Dispari**

2. **Pari**

3. **Dispari**

4. **Dispari**

5. **Dispari**

6. **Dispari**

7. **Pari**

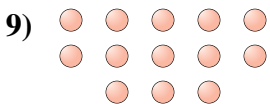
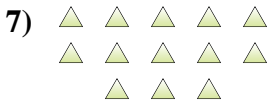

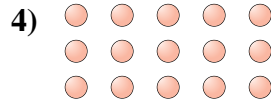
8. **Dispari**

9. **Pari**

10. **Pari**



Determina se il numero delle figure all'interno di ogni rettangolo è pari o dispari.



Risposte

1. _____

2. _____

3. _____

4. _____

5. _____

6. _____

7. _____

8. _____

9. _____

10. _____



Determina se il numero delle figure all'interno di ogni rettangolo è pari o dispari.



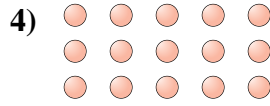
6




14



10



15



17



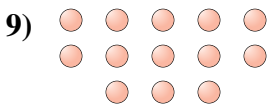
7



13



10



13



8

Risposte

1. **Pari**

2. **Pari**

3. **Pari**

4. **Dispari**

5. **Dispari**

6. **Dispari**

7. **Dispari**

8. **Pari**

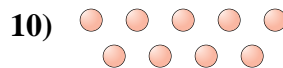
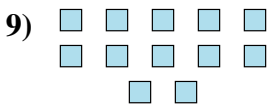

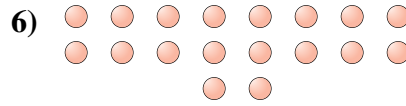

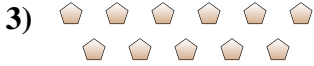
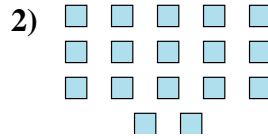
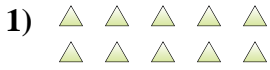
9. **Dispari**

10. **Pari**



Determina se il numero delle figure all'interno di ogni rettangolo è pari o dispari.

Risposte



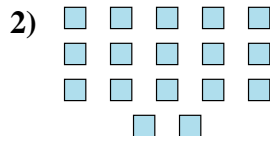
- 1. _____
- 2. _____
- 3. _____
- 4. _____
- 5. _____
- 6. _____
- 7. _____
- 8. _____
- 9. _____
- 10. _____



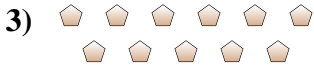
Determina se il numero delle figure all'interno di ogni rettangolo è pari o dispari.



10



17



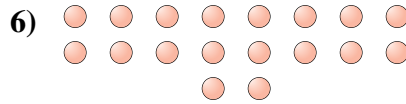
11




19



14



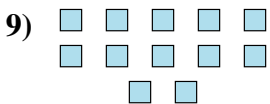
18



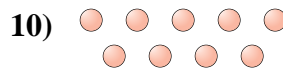
18



8



12



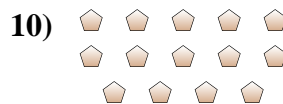
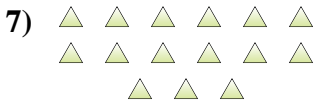
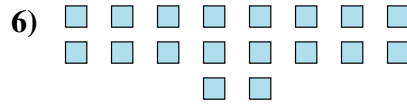
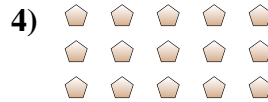

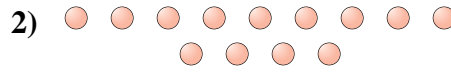
9

Risposte

1. Pari
2. Dispari
3. Dispari
4. Dispari
5. Pari
6. Pari
7. Pari
8. Pari
9. Pari
10. Dispari



Determina se il numero delle figure all'interno di ogni rettangolo è pari o dispari.



Risposte

1. _____

2. _____

3. _____

4. _____

5. _____

6. _____

7. _____

8. _____

9. _____

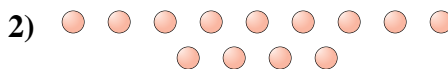
10. _____




Determina se il numero delle figure all'interno di ogni rettangolo è pari o dispari.



9



13



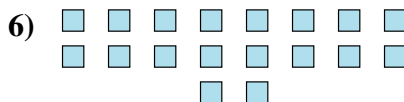
19



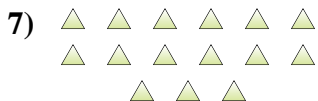
15



17



18



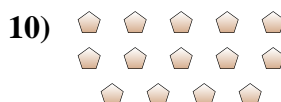
15



5



10



14

Risposte

1. **Dispari**

2. **Dispari**

3. **Dispari**

4. **Dispari**

5. **Dispari**

6. **Pari**

7. **Dispari**

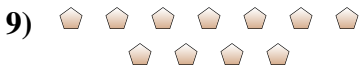
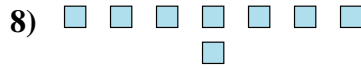
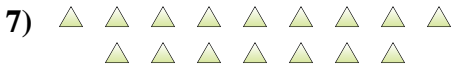
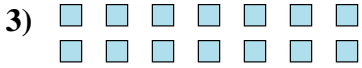
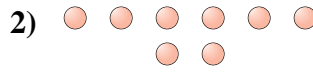
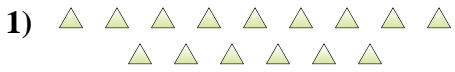
8. **Dispari**

9. **Pari**

10. **Pari**



Determina se il numero delle figure all'interno di ogni rettangolo è pari o dispari.



Risposte

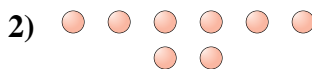
1. _____
2. _____
3. _____
4. _____
5. _____
6. _____
7. _____
8. _____
9. _____
10. _____



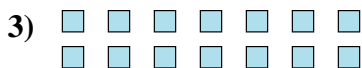
Determina se il numero delle figure all'interno di ogni rettangolo è pari o dispari.



15



8



14



10



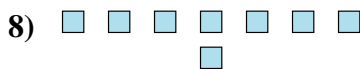
12



8



16



8



11



7

Risposte

1. **Dispari**

2. **Pari**

3. **Pari**

4. **Pari**

5. **Pari**

6. **Pari**

7. **Pari**

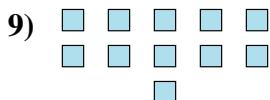
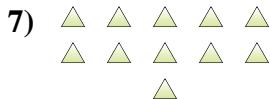
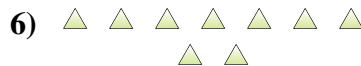
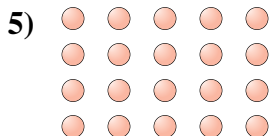
8. **Pari**

9. **Dispari**

10. **Dispari**



Determina se il numero delle figure all'interno di ogni rettangolo è pari o dispari.



Risposte

- 1. _____
- 2. _____
- 3. _____
- 4. _____
- 5. _____
- 6. _____
- 7. _____
- 8. _____
- 9. _____
- 10. _____



Determina se il numero delle figure all'interno di ogni rettangolo è pari o dispari.



7



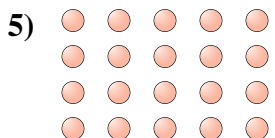
18



6



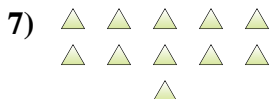
7



20



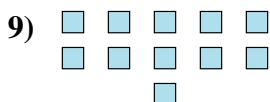
9



11



5



11



6

Risposte

1. **Dispari**

2. **Pari**

3. **Pari**

4. **Dispari**

5. **Pari**

6. **Dispari**

7. **Dispari**

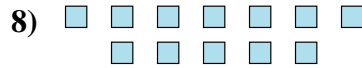
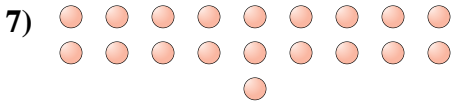
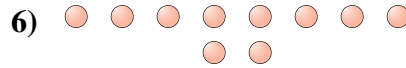
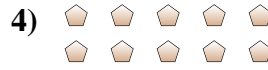

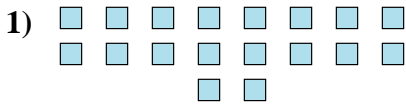
8. **Dispari**

9. **Dispari**

10. **Pari**



Determina se il numero delle figure all'interno di ogni rettangolo è pari o dispari.

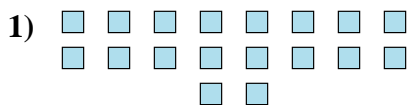


Risposte


1. _____
2. _____
3. _____
4. _____
5. _____
6. _____
7. _____
8. _____
9. _____
10. _____



Determina se il numero delle figure all'interno di ogni rettangolo è pari o dispari.



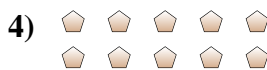
18



20



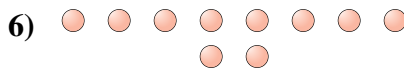
14



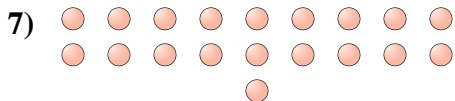
10



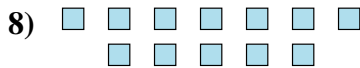
12



10



19



12



7



9

Risposte

1. Pari

2. Pari

3. Pari

4. Pari

5. Pari

6. Pari

7. Dispari

8. Pari

9. Dispari

10. Dispari