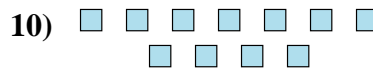
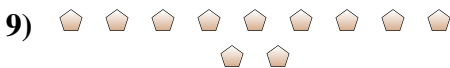

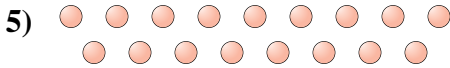
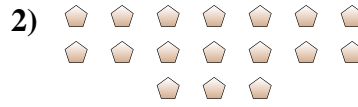




Determina se il numero delle figure all'interno di ogni rettangolo è pari o dispari.



**Risposte**

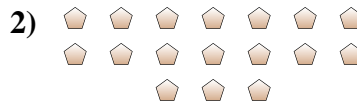
1. \_\_\_\_\_
2. \_\_\_\_\_
3. \_\_\_\_\_
4. \_\_\_\_\_
5. \_\_\_\_\_
6. \_\_\_\_\_
7. \_\_\_\_\_
8. \_\_\_\_\_
9. \_\_\_\_\_
10. \_\_\_\_\_



Determina se il numero delle figure all'interno di ogni rettangolo è pari o dispari.



6



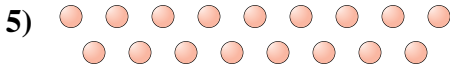
17




16



12



17



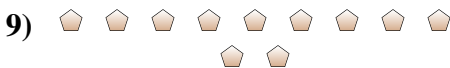
15



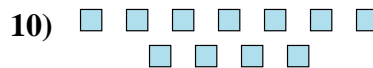
8



10



11



11

**Risposte**

1. Pari

2. Dispari

3. Pari

4. Pari

5. Dispari

6. Dispari

7. Pari

8. Pari

9. Dispari

10. Dispari