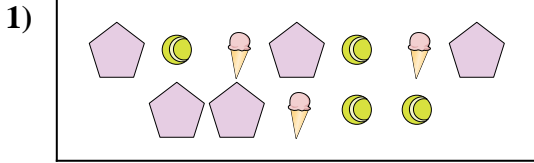





Confronta il numero delle forme.



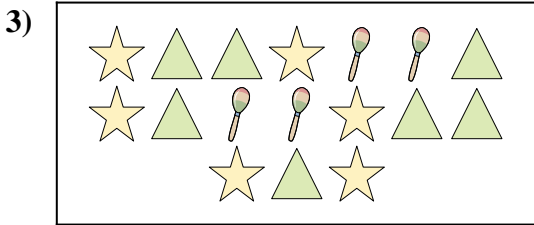
Ci sono meno o meno ?

- A.
- B.




Ci sono più o più ?

- A.
- B.




Ci sono meno o meno ?

- A.
- B.



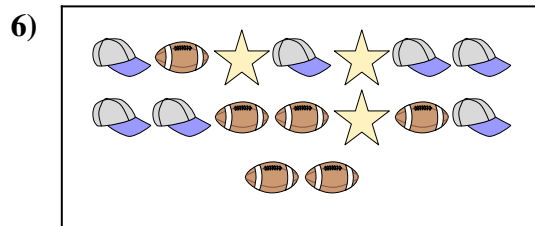
Ci sono meno o meno ?

- A.
- B.



Ci sono meno o meno ?

- A.
- B.



Ci sono meno o meno ?

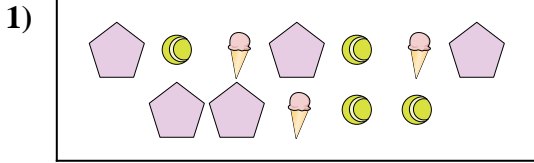
- A.
- B.

Risposte

- 1. _____
- 2. _____
- 3. _____
- 4. _____
- 5. _____
- 6. _____




Confronta il numero delle forme.



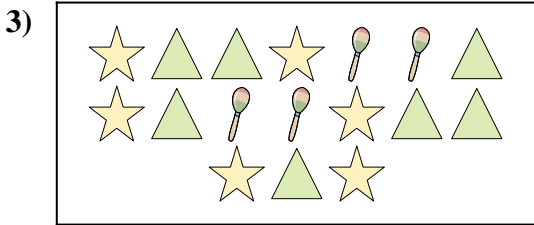
Ci sono meno o meno ?

- A.
- B.




Ci sono più o più ?

- A.
- B.




Ci sono meno o meno ?

- A.
- B.



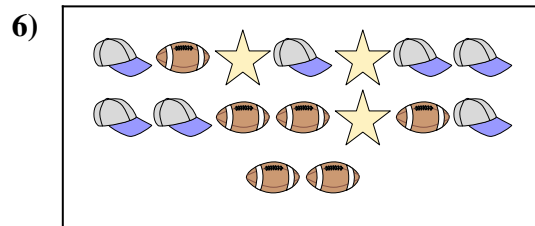
Ci sono meno o meno ?

- A.
- B.



Ci sono meno o meno ?

- A.
- B.



Ci sono meno o meno ?

- A.
- B.

Risposte

- 1. **A**
- 2. **A**
- 3. **B**
- 4. **B**
- 5. **A**
- 6. **B**