




Confronta il numero delle forme.


Risposte



Ci sono più o più ?

A.


B.



Ci sono più o più ?

A.


B.



Ci sono meno o meno ?

A.

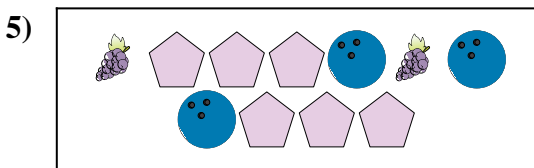
B.



Ci sono meno o meno ?

A.


B.



Ci sono meno o meno ?

A.

B.



Ci sono meno o meno ?

A.


B.

- 1. _____
- 2. _____
- 3. _____
- 4. _____
- 5. _____
- 6. _____




Confronta il numero delle forme.


Risposte




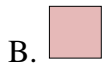
Ci sono più o più ?



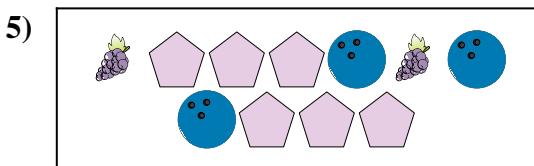
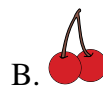
Ci sono più o più ?





Ci sono meno o meno ?



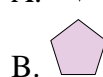
Ci sono meno o meno ?



Ci sono meno o meno ?



Ci sono meno o meno ?



- 1. **B**
- 2. **B**
- 3. **A**
- 4. **A**
- 5. **B**
- 6. **B**