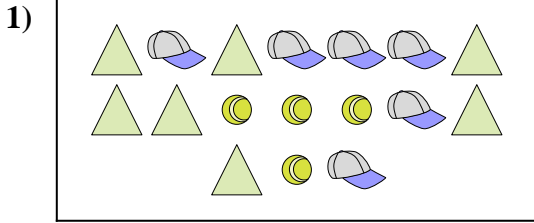




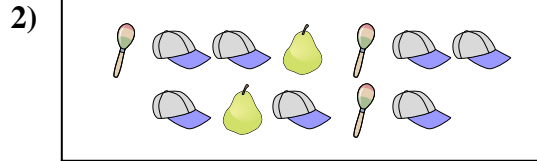
Confronta il numero delle forme.

Risposte




Ci sono più o più ?

- A.
- B.



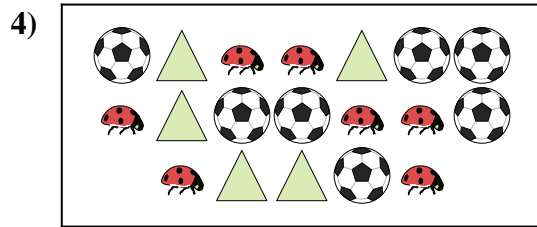
Ci sono meno o meno ?

- A.
- B.



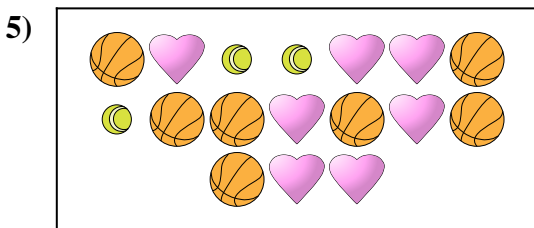
Ci sono meno o meno ?

- A.
- B.




Ci sono meno o meno ?

- A.
- B.



Ci sono meno o meno ?

- A.
- B.



Ci sono meno o meno ?

- A.
- B.

1. _____

2. _____

3. _____

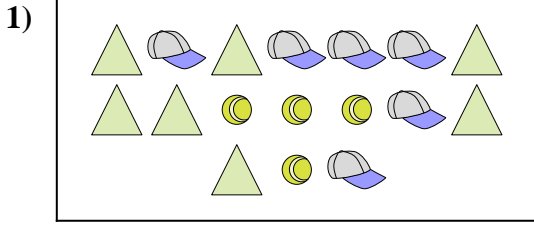
4. _____

5. _____

6. _____




Confronta il numero delle forme.




Ci sono più o più ?

- A.
- B.



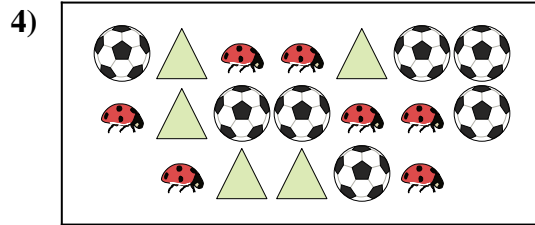
Ci sono meno o meno ?

- A.
- B.




Ci sono meno o meno ?

- A.
- B.




Ci sono meno o meno ?

- A.
- B.



Ci sono meno o meno ?

- A.
- B.



Ci sono meno o meno ?

- A.
- B.

Risposte

- 1. **A**
- 2. **A**
- 3. **A**
- 4. **A**
- 5. **A**
- 6. **A**