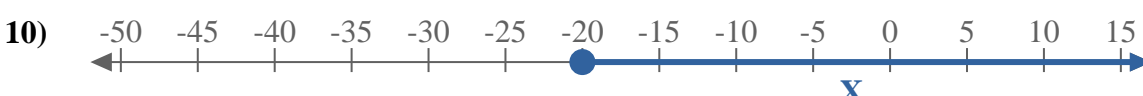
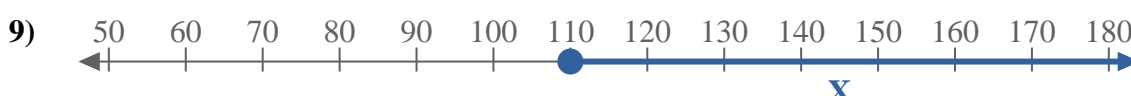
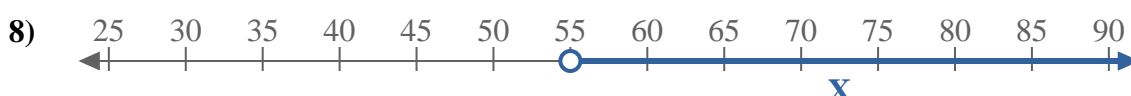
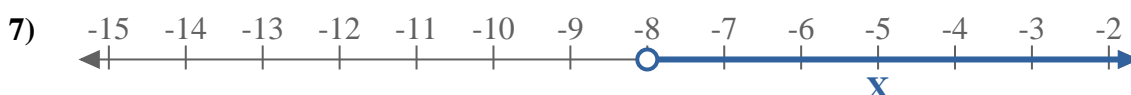
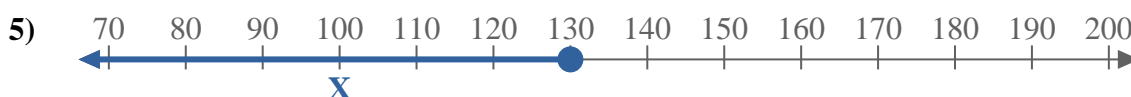
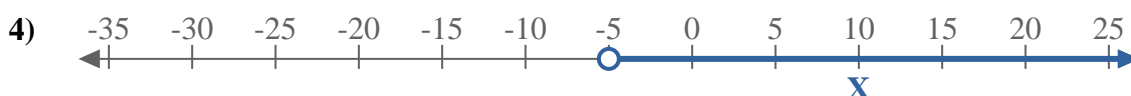
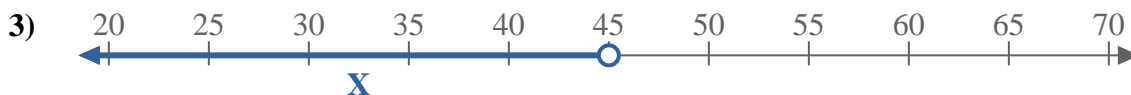





Scrivi le disuguaglianze che corrispondano ad ogni linea numerata.



**Risposte**

Es.  $X \leq -125$

1. \_\_\_\_\_

2. \_\_\_\_\_

3. \_\_\_\_\_

4. \_\_\_\_\_

5. \_\_\_\_\_

6. \_\_\_\_\_

7. \_\_\_\_\_

8. \_\_\_\_\_

9. \_\_\_\_\_

10. \_\_\_\_\_

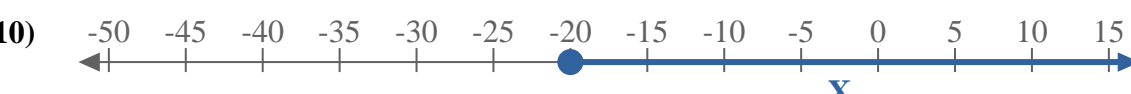
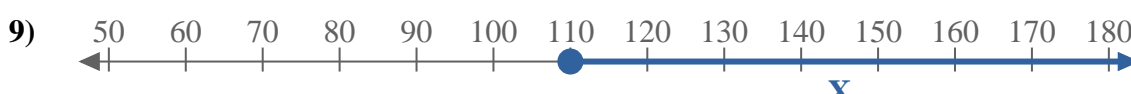
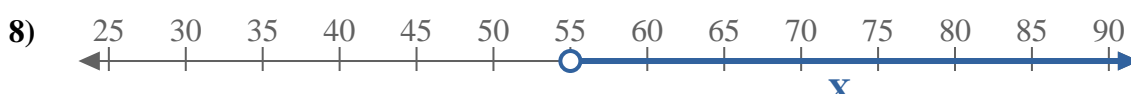
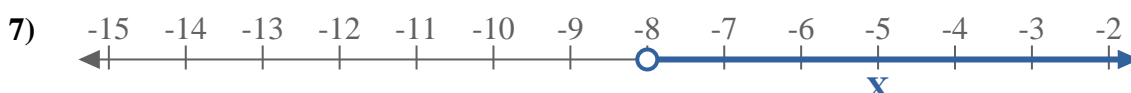
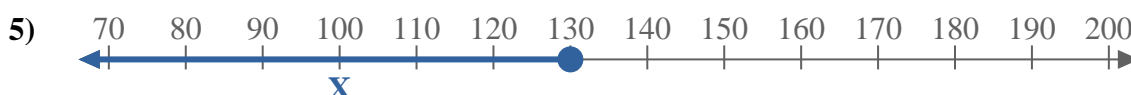
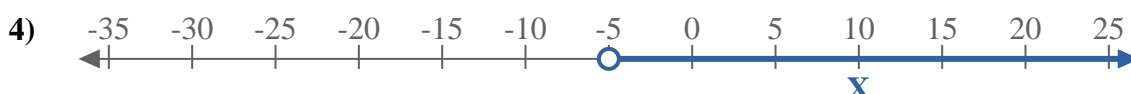
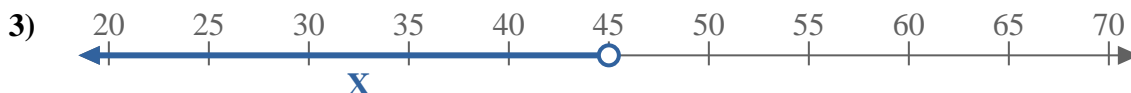

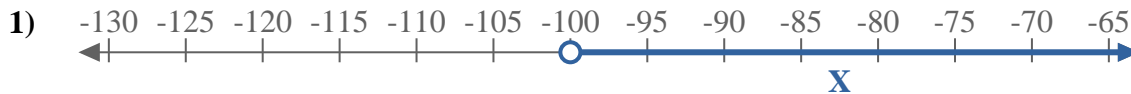
11. \_\_\_\_\_

12. \_\_\_\_\_

13. \_\_\_\_\_



Scrivi le disuguaglianze che corrispondano ad ogni linea numerata.



**Risposte**

Es.  $X \leq -125$

1.  $X > -100$

2.  $X \leq -60$

3.  $X < 45$

4.  $X > -5$

5.  $X \leq 130$

6.  $X \leq -40$

7.  $X > -8$

8.  $X > 55$

9.  $X \geq 110$

10.  $X \geq -20$

11.  $X \geq -20$

12.  $X \leq -170$

13.  $X < 9$