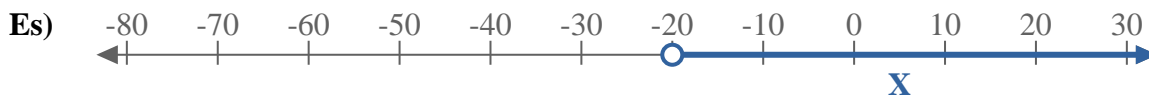


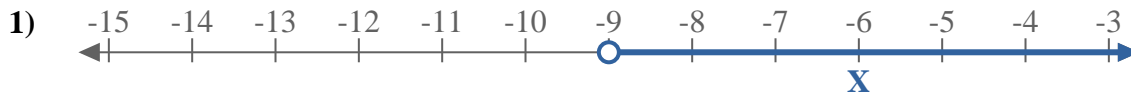


Scrivi le disuguaglianze che corrispondano ad ogni linea numerata.



**Risposte**

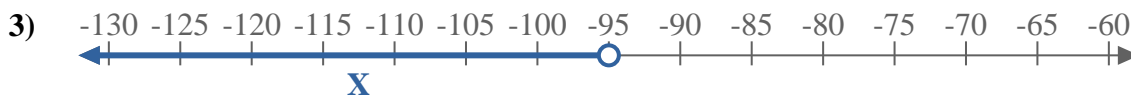
Es.  **$X > -20$**



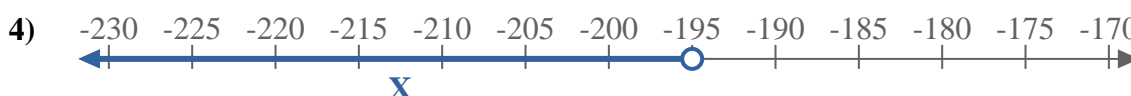
1. \_\_\_\_\_



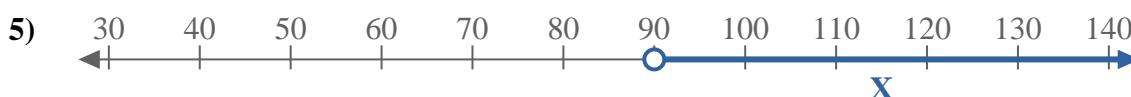
2. \_\_\_\_\_



3. \_\_\_\_\_



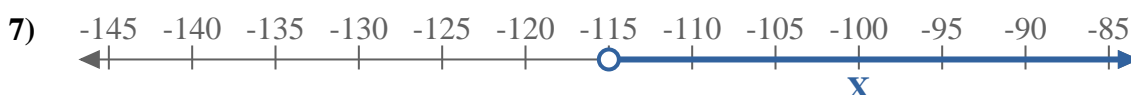
4. \_\_\_\_\_



5. \_\_\_\_\_



6. \_\_\_\_\_



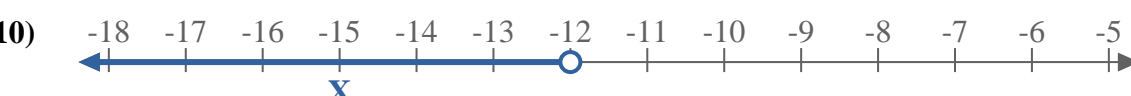
7. \_\_\_\_\_



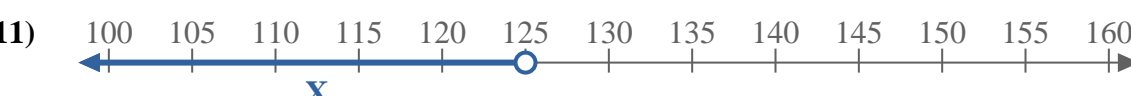
8. \_\_\_\_\_



9. \_\_\_\_\_



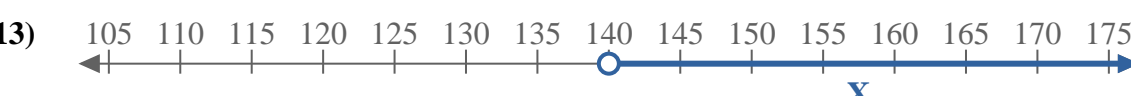
10. \_\_\_\_\_



11. \_\_\_\_\_



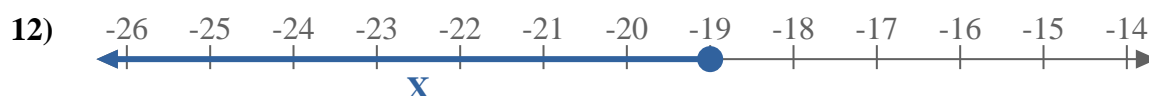
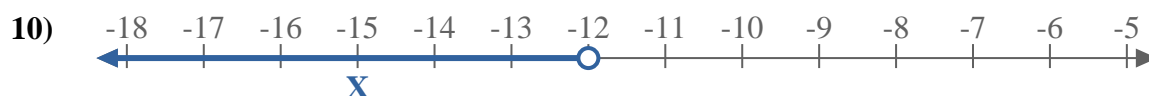
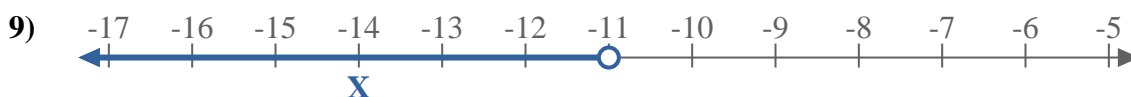
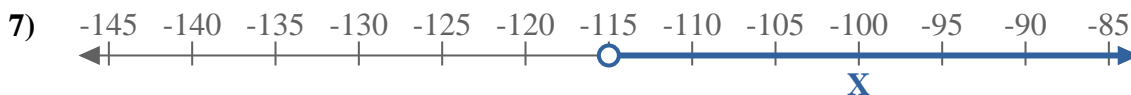
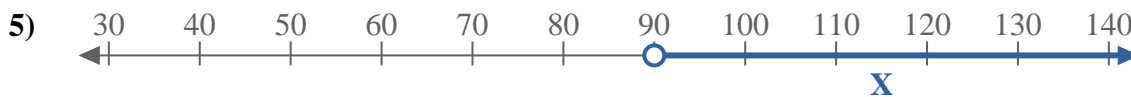
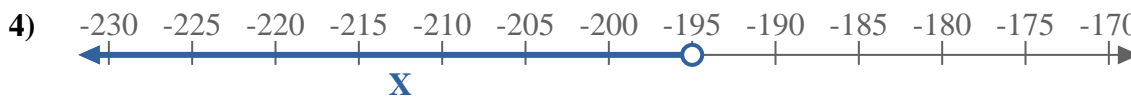
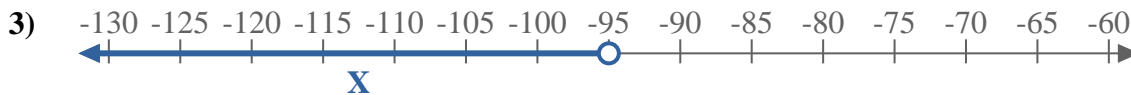
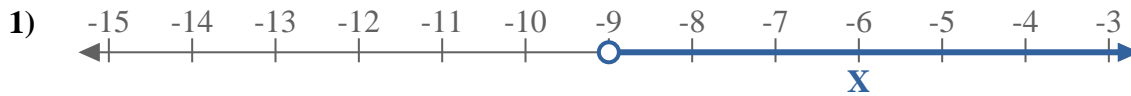
12. \_\_\_\_\_



13. \_\_\_\_\_



Scrivi le disuguaglianze che corrispondano ad ogni linea numerata.



**Risposte**

Es.  $X > -20$

1.  $X > -9$

2.  $X \geq 120$

3.  $X < -95$

4.  $X < -195$

5.  $X > 90$

6.  $X < 19$

7.  $X > -115$

8.  $X \geq 1$

9.  $X < -11$

10.  $X < -12$

11.  $X < 125$

12.  $X \leq -19$

13.  $X > 140$