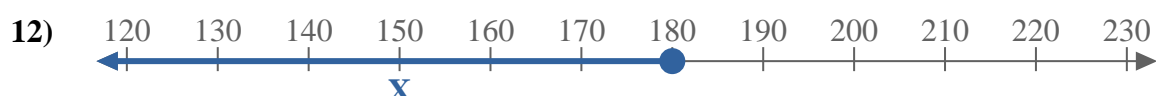
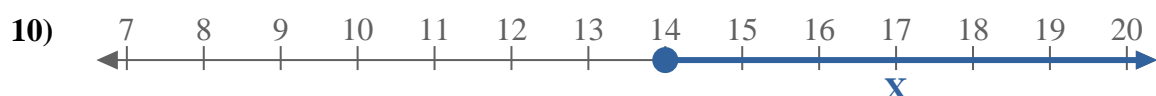
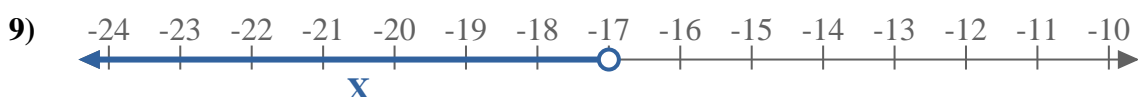
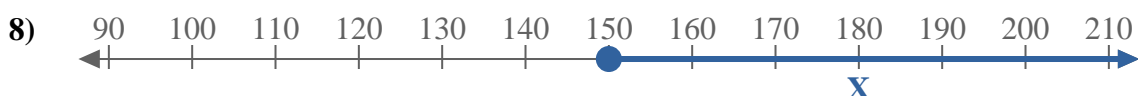
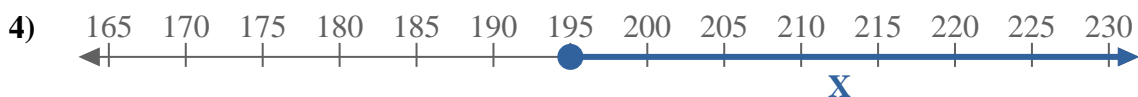
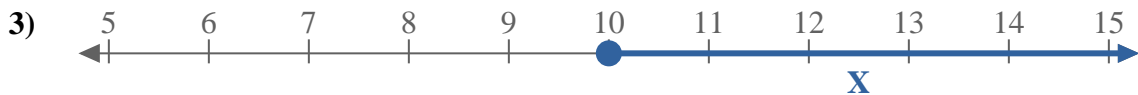
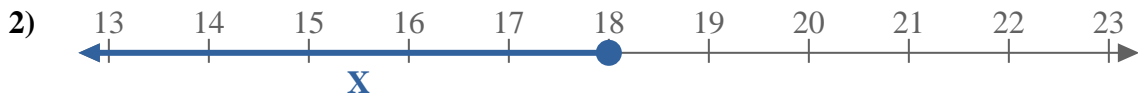
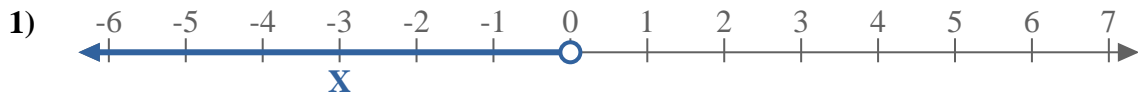
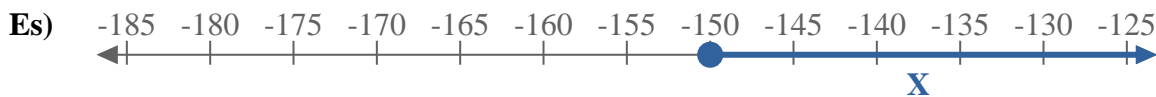




Scrivi le disuguaglianze che corrispondano ad ogni linea numerata.



**Risposte**

Es.  $X \geq -150$

1. \_\_\_\_\_

2. \_\_\_\_\_

3. \_\_\_\_\_

4. \_\_\_\_\_

5. \_\_\_\_\_

6. \_\_\_\_\_

7. \_\_\_\_\_

8. \_\_\_\_\_

9. \_\_\_\_\_

10. \_\_\_\_\_

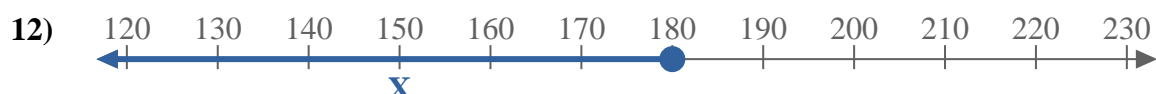
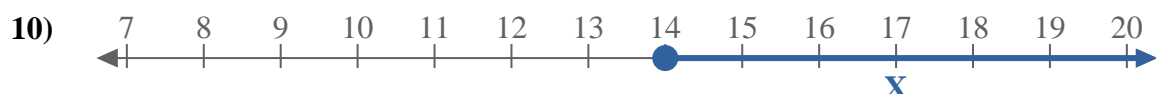
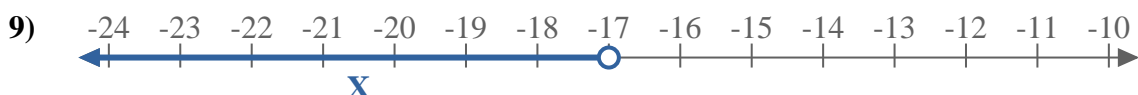
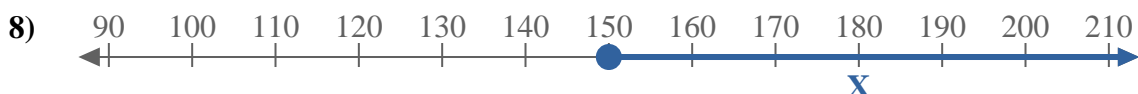
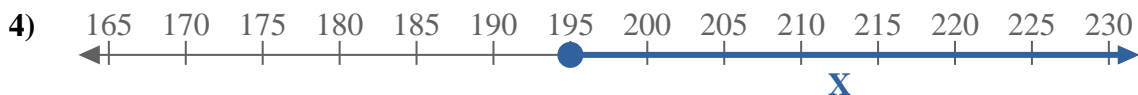
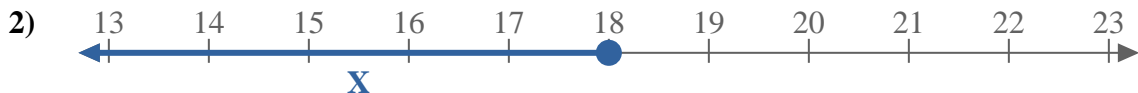
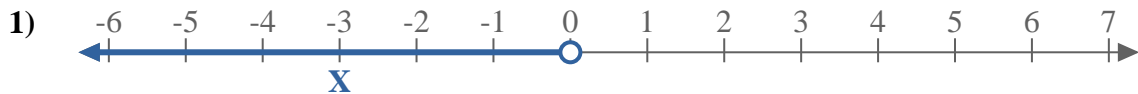
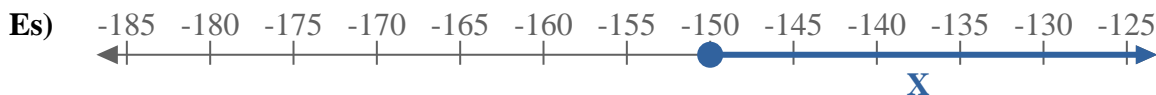
11. \_\_\_\_\_

12. \_\_\_\_\_

13. \_\_\_\_\_



Scrivi le disuguaglianze che corrispondano ad ogni linea numerata.



**Risposte**

Es.  $X \geq -150$

1.  $X < 0$

2.  $X \leq 18$

3.  $X \geq 10$

4.  $X \geq 195$

5.  $X < 10$

6.  $X \leq 130$

7.  $X \leq -8$

8.  $X \geq 150$

9.  $X < -17$

10.  $X \geq 14$

11.  $X < -8$

12.  $X \leq 180$

13.  $X > -55$