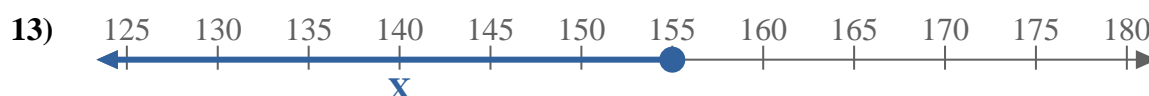
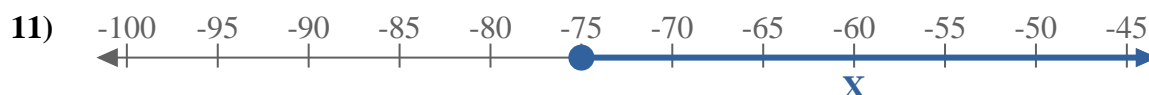
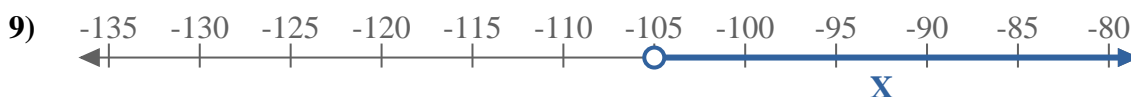
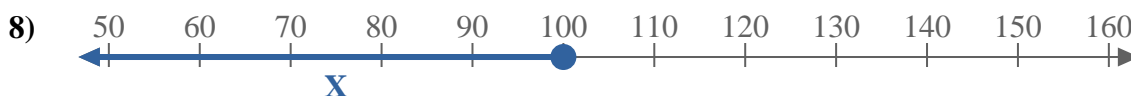
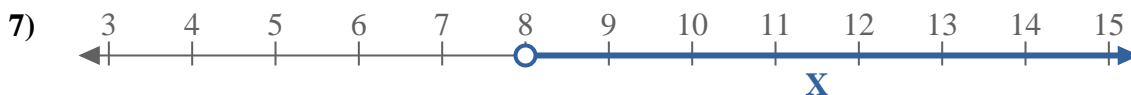
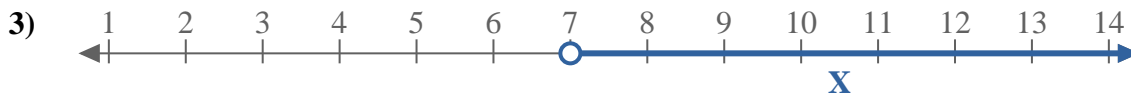
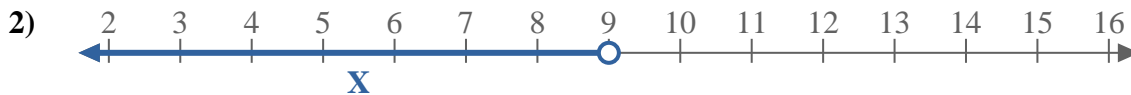
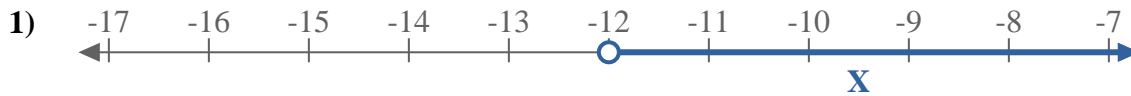




Scrivi le disuguaglianze che corrispondano ad ogni linea numerata.



Risposte

Es. $X \leq 130$

1. _____

2. _____

3. _____

4. _____

5. _____

6. _____

7. _____

8. _____

9. _____

10. _____

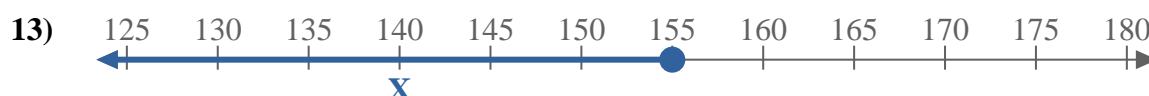
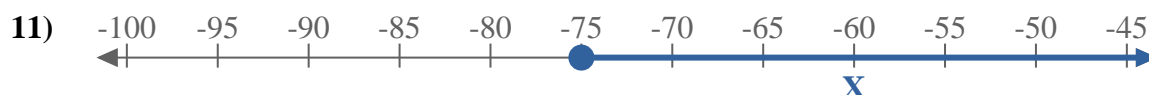
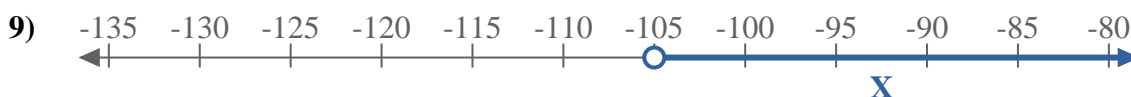
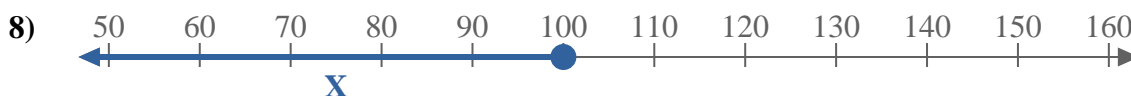
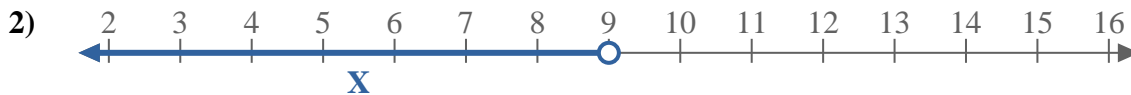
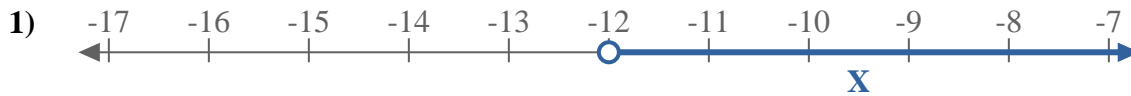
11. _____

12. _____

13. _____



Scrivi le disuguaglianze che corrispondano ad ogni linea numerata.



Risposte

Es. $X \leq 130$

1. $X > -12$

2. $X < 9$

3. $X > 7$

4. $X > 4$

5. $X < 2$

6. $X < -1$

7. $X > 8$

8. $X \leq 100$

9. $X > -105$

10. $X \leq 9$

11. $X \geq -75$

12. $X \leq 8$

13. $X \leq 155$