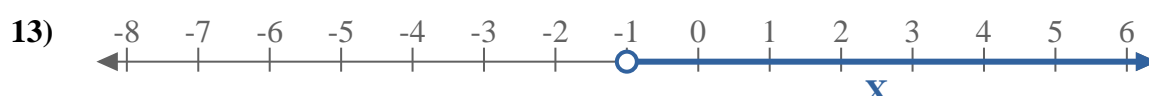
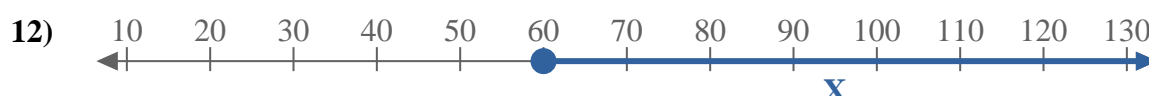
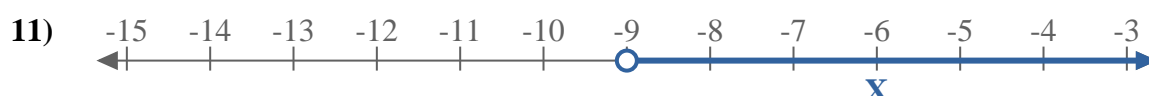
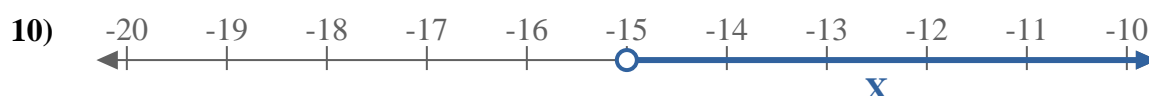
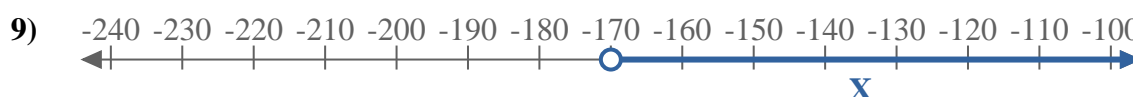
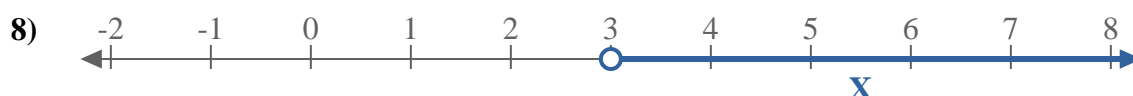
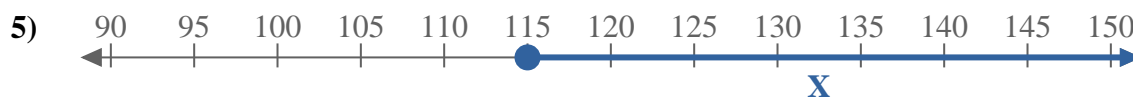
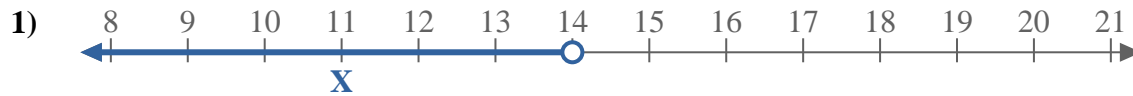




Scrivi le disuguaglianze che corrispondano ad ogni linea numerata.



**Risposte**

Es.  $X \geq -3$

1. \_\_\_\_\_

2. \_\_\_\_\_

3. \_\_\_\_\_

4. \_\_\_\_\_

5. \_\_\_\_\_

6. \_\_\_\_\_

7. \_\_\_\_\_

8. \_\_\_\_\_

9. \_\_\_\_\_

10. \_\_\_\_\_

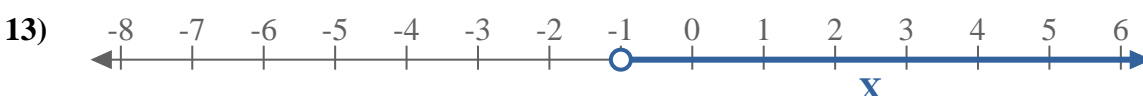
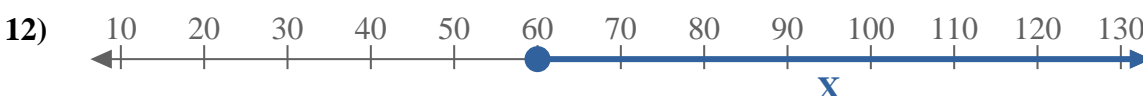
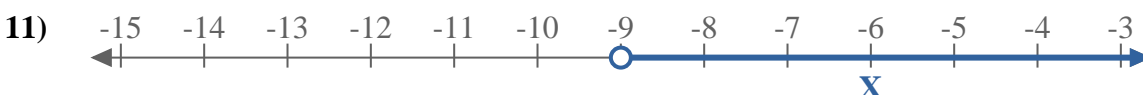
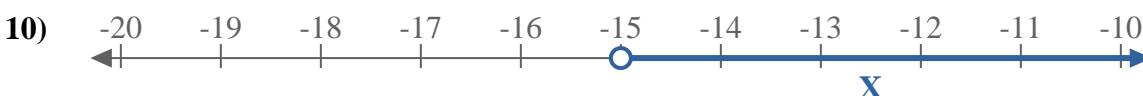
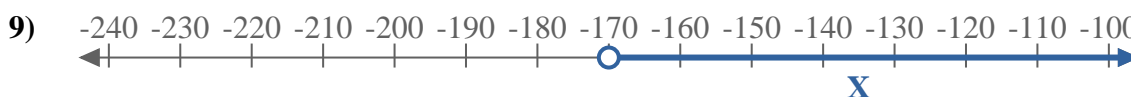
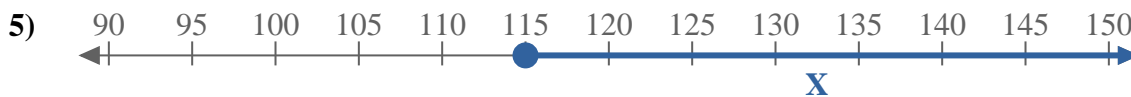
11. \_\_\_\_\_

12. \_\_\_\_\_

13. \_\_\_\_\_



Scrivi le disuguaglianze che corrispondano ad ogni linea numerata.



**Risposte**

Es.  $x \geq -3$

1.  $x < 14$

2.  $x \leq 5$

3.  $x \leq -19$

4.  $x < -120$

5.  $x \geq 115$

6.  $x \leq 5$

7.  $x \geq -70$

8.  $x > 3$

9.  $x > -170$

10.  $x > -15$

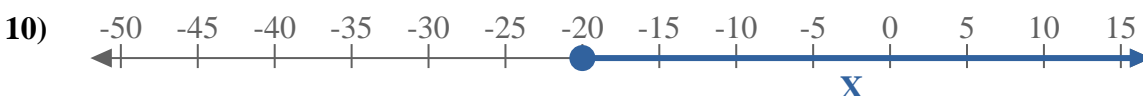
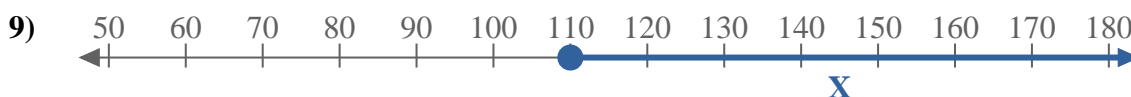
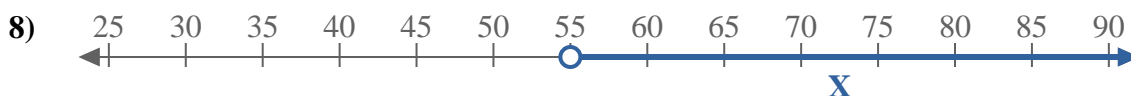
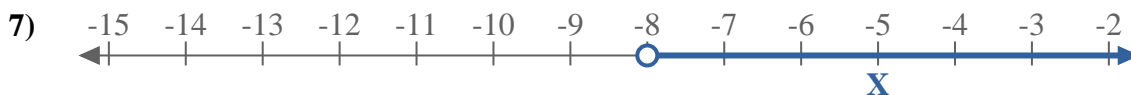
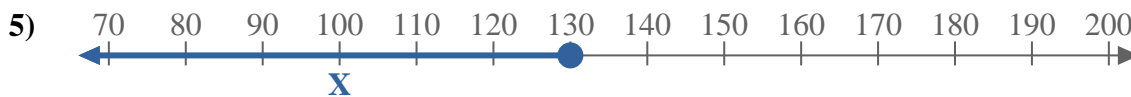
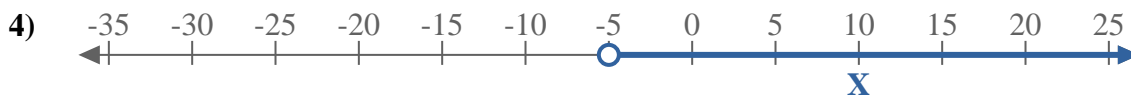
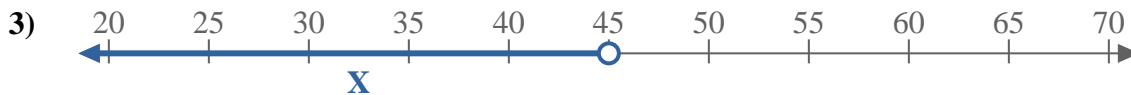

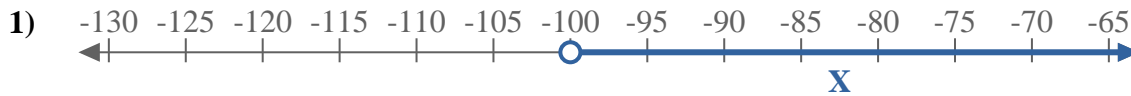
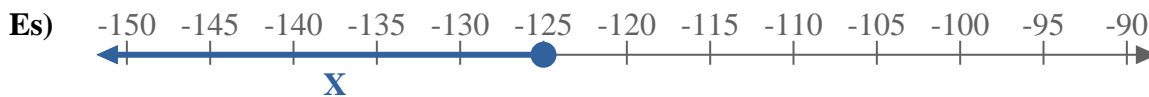
11.  $x > -9$

12.  $x \geq 60$

13.  $x > -1$



Scrivi le disuguaglianze che corrispondano ad ogni linea numerata.



**Risposte**

Es.  $X \leq -125$

1. \_\_\_\_\_

2. \_\_\_\_\_

3. \_\_\_\_\_

4. \_\_\_\_\_

5. \_\_\_\_\_

6. \_\_\_\_\_

7. \_\_\_\_\_

8. \_\_\_\_\_

9. \_\_\_\_\_

10. \_\_\_\_\_

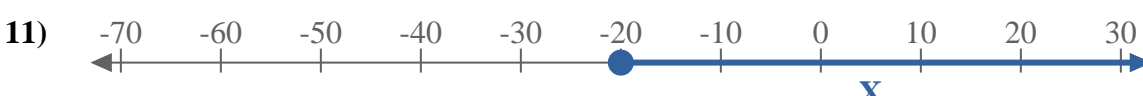
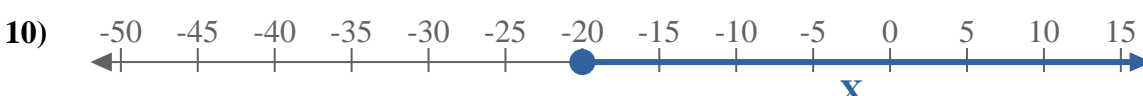
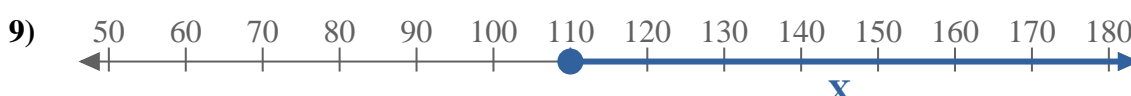
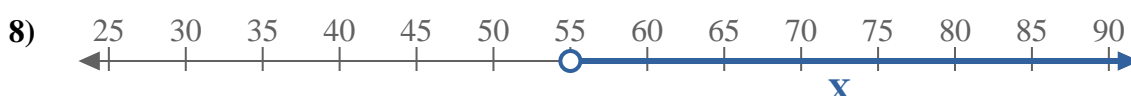
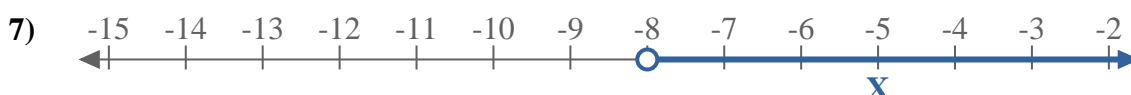
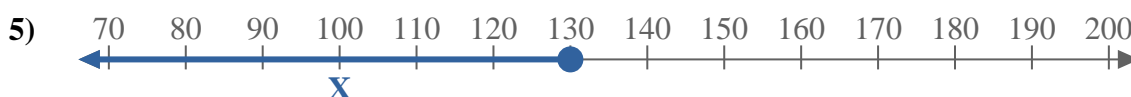
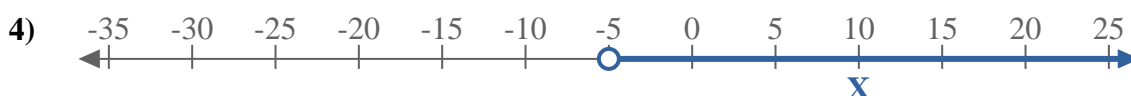
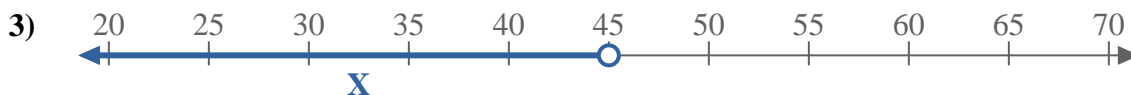

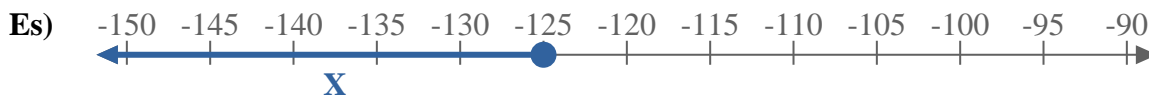
11. \_\_\_\_\_

12. \_\_\_\_\_

13. \_\_\_\_\_



Scrivi le disuguaglianze che corrispondano ad ogni linea numerata.



**Risposte**

Es.  $X \leq -125$

1.  $X > -100$

2.  $X \leq -60$

3.  $X < 45$

4.  $X > -5$

5.  $X \leq 130$

6.  $X \leq -40$

7.  $X > -8$

8.  $X > 55$

9.  $X \geq 110$

10.  $X \geq -20$

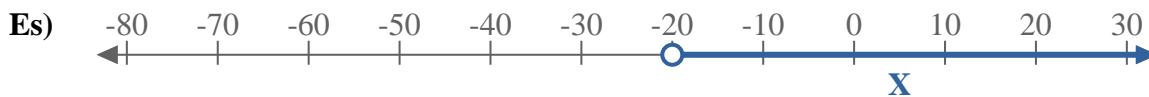
11.  $X \geq -20$

12.  $X \leq -170$

13.  $X < 9$

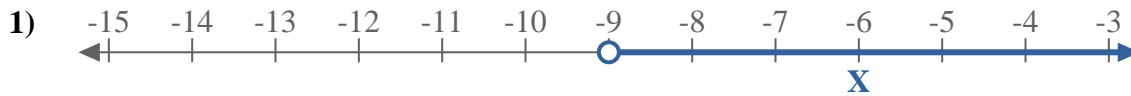


Scrivi le disuguaglianze che corrispondano ad ogni linea numerata.

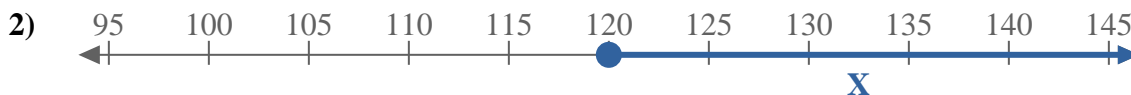


**Risposte**

Es.  $X > -20$



1. \_\_\_\_\_



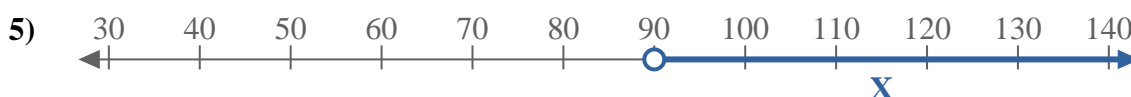
2. \_\_\_\_\_



3. \_\_\_\_\_



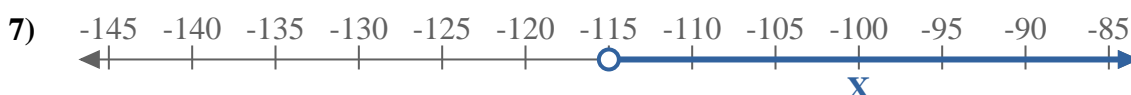
4. \_\_\_\_\_



5. \_\_\_\_\_



6. \_\_\_\_\_



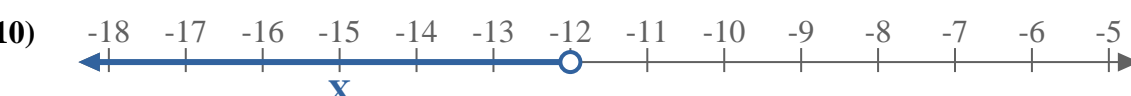
7. \_\_\_\_\_



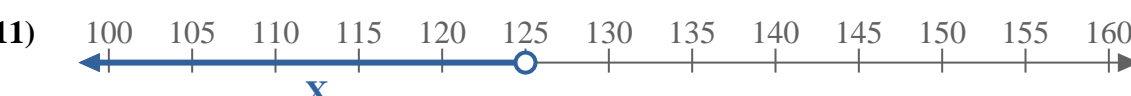
8. \_\_\_\_\_



9. \_\_\_\_\_



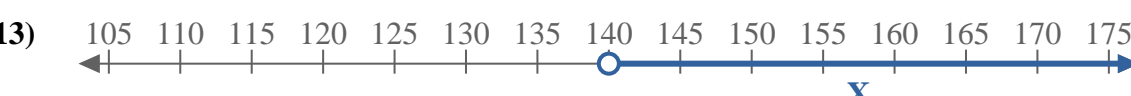
10. \_\_\_\_\_



11. \_\_\_\_\_



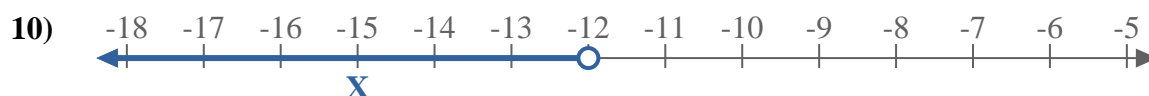
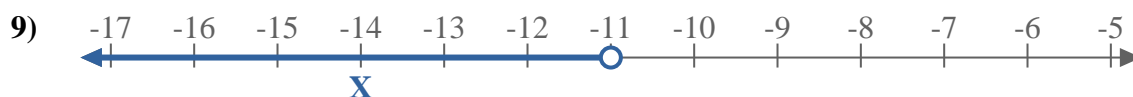
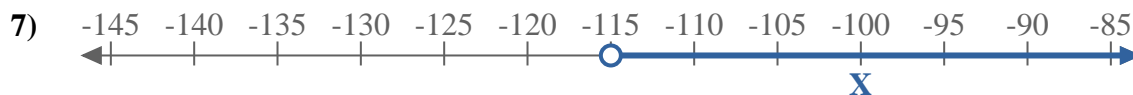
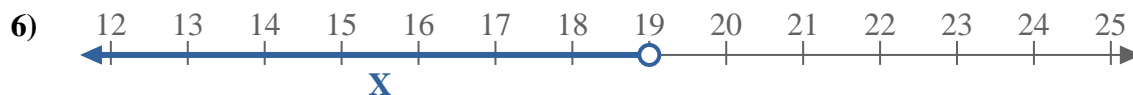
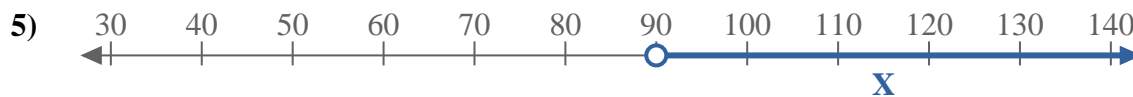
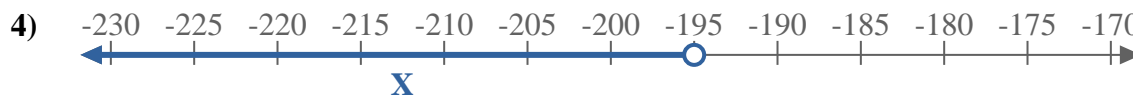
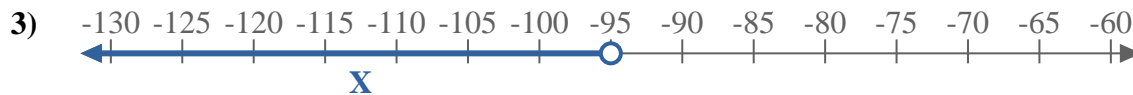
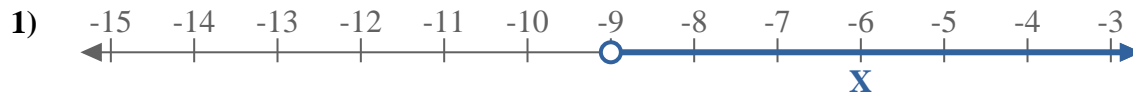
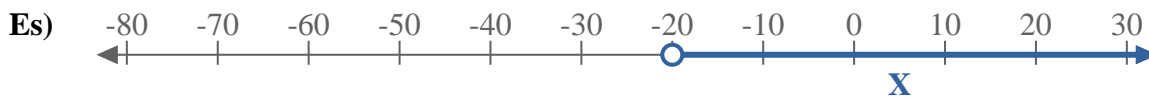
12. \_\_\_\_\_



13. \_\_\_\_\_



Scrivi le disuguaglianze che corrispondano ad ogni linea numerata.



**Risposte**

Es.  $X > -20$

1.  $X > -9$

2.  $X \geq 120$

3.  $X < -95$

4.  $X < -195$

5.  $X > 90$

6.  $X < 19$

7.  $X > -115$

8.  $X \geq 1$

9.  $X < -11$

10.  $X < -12$

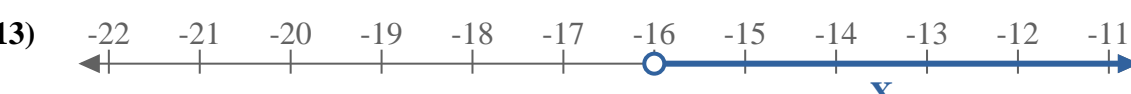
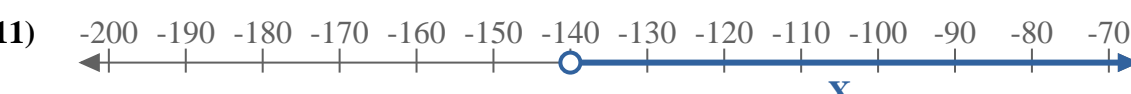
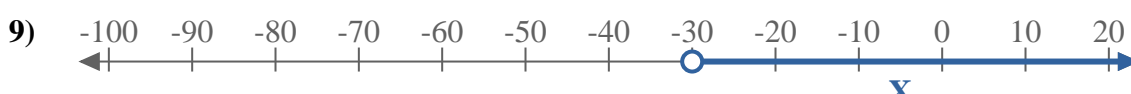
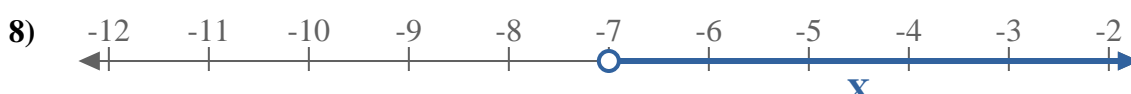
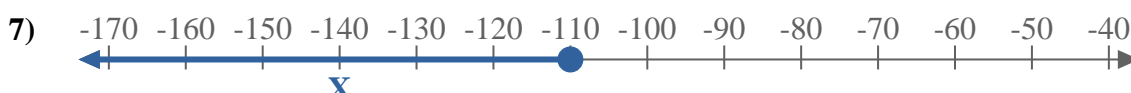
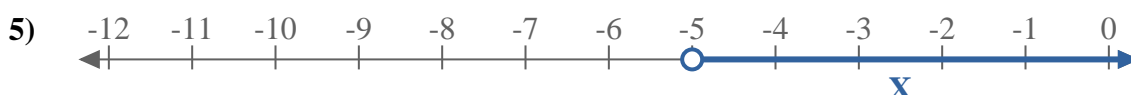
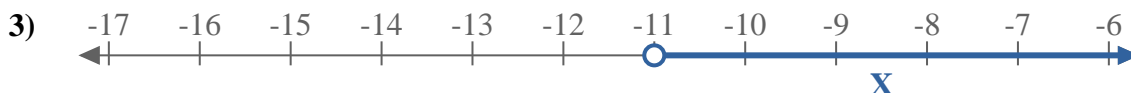
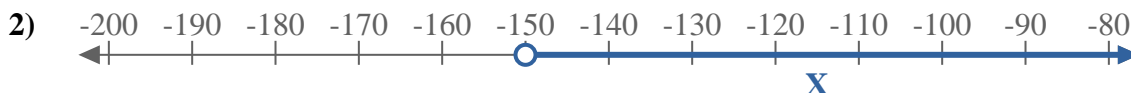
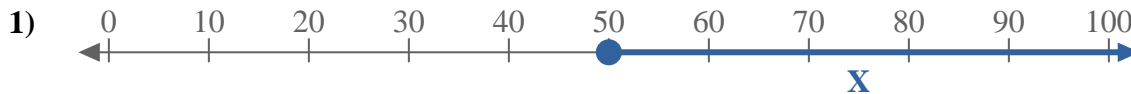
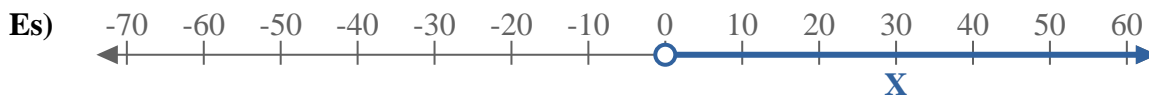
11.  $X < 125$

12.  $X \leq -19$

13.  $X > 140$



Scrivi le disuguaglianze che corrispondano ad ogni linea numerata.



**Risposte**

Es. **X > 0**

1. \_\_\_\_\_

2. \_\_\_\_\_

3. \_\_\_\_\_

4. \_\_\_\_\_

5. \_\_\_\_\_

6. \_\_\_\_\_

7. \_\_\_\_\_

8. \_\_\_\_\_

9. \_\_\_\_\_

10. \_\_\_\_\_

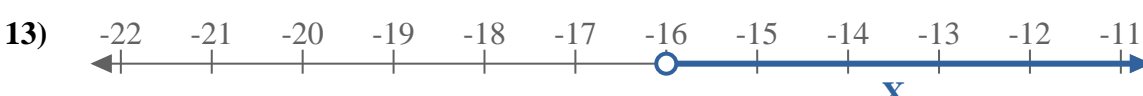
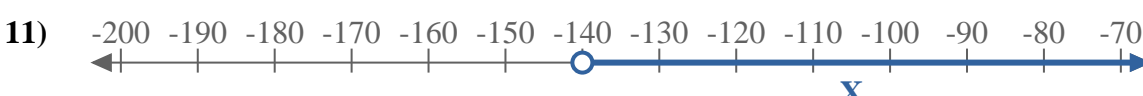
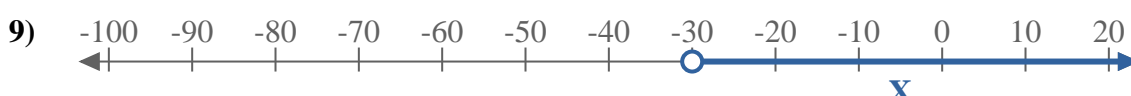
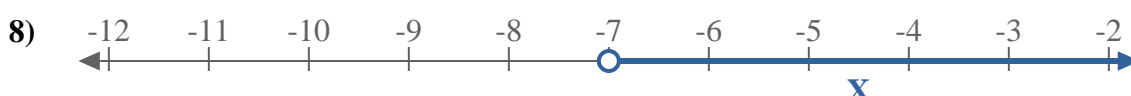
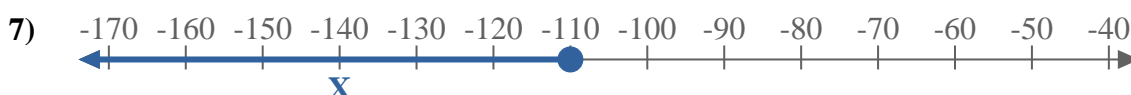
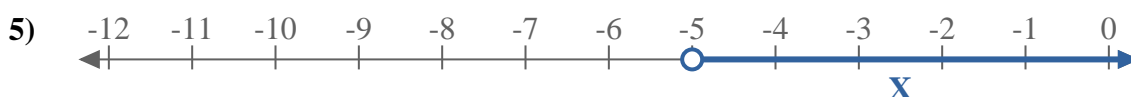
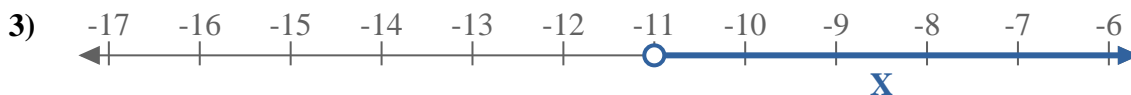
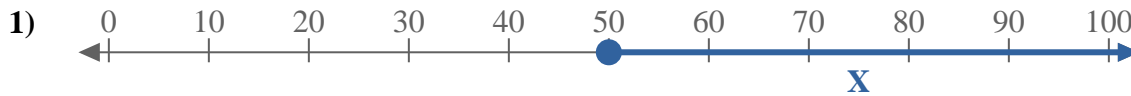
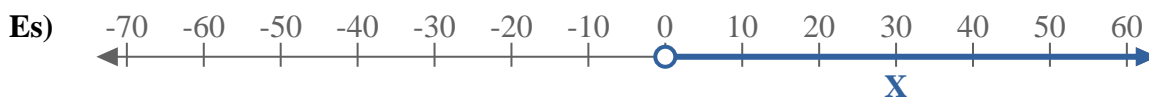
11. \_\_\_\_\_

12. \_\_\_\_\_

13. \_\_\_\_\_



Scrivi le disuguaglianze che corrispondano ad ogni linea numerata.



**Risposte**

Es.  $X > 0$

1.  $X \geq 50$

2.  $X > -150$

3.  $X > -11$

4.  $X > 80$

5.  $X > -5$

6.  $X \leq -35$

7.  $X \leq -110$

8.  $X > -7$

9.  $X > -30$

10.  $X < 100$

11.  $X > -140$

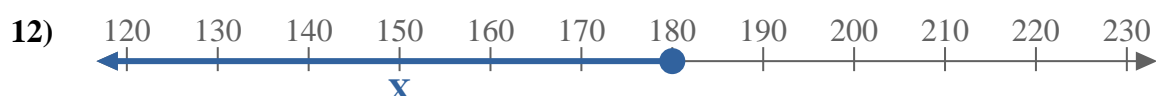
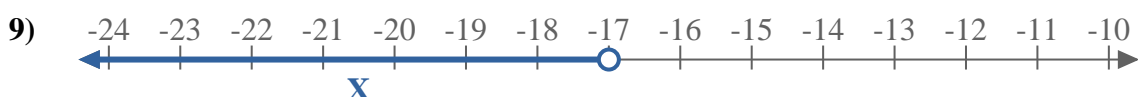
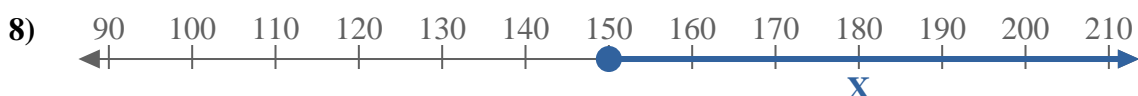
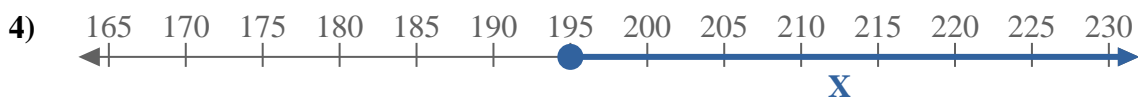
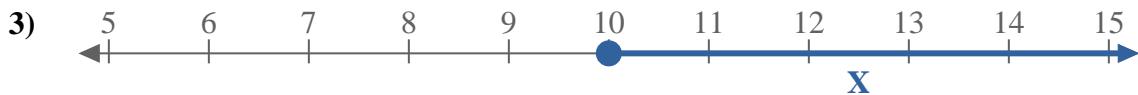
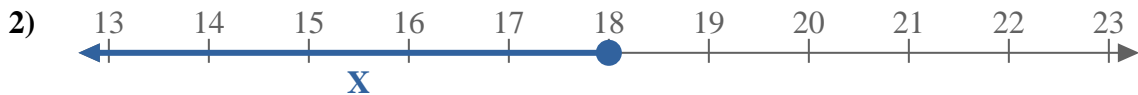
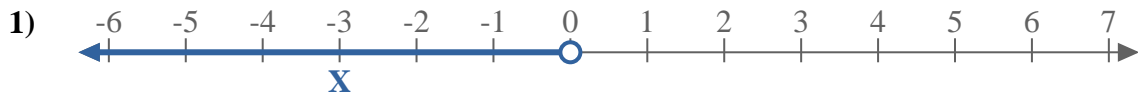
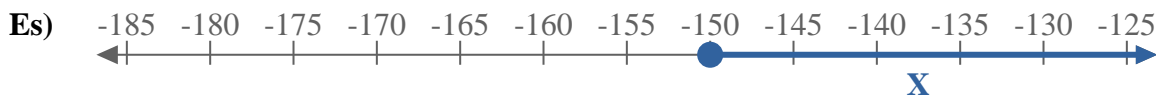
12.  $X < 10$

13.  $X > -16$





Scrivi le disuguaglianze che corrispondano ad ogni linea numerata.



**Risposte**

Es.  $X \geq -150$

1. \_\_\_\_\_

2. \_\_\_\_\_

3. \_\_\_\_\_

4. \_\_\_\_\_

5. \_\_\_\_\_

6. \_\_\_\_\_

7. \_\_\_\_\_

8. \_\_\_\_\_

9. \_\_\_\_\_

10. \_\_\_\_\_

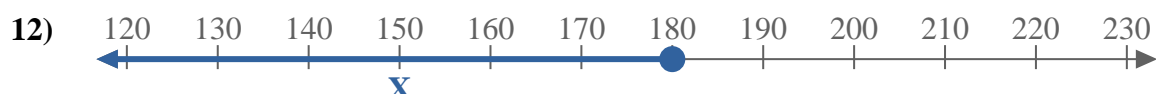
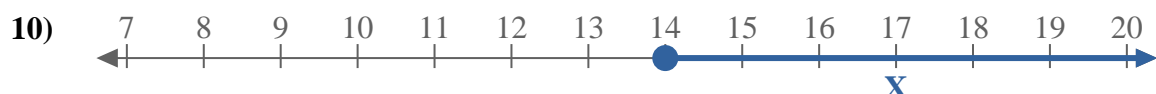
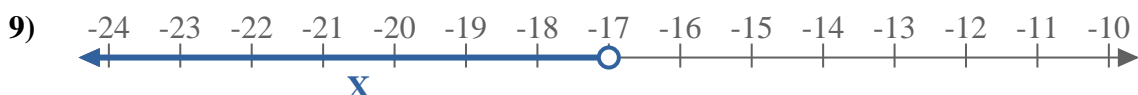
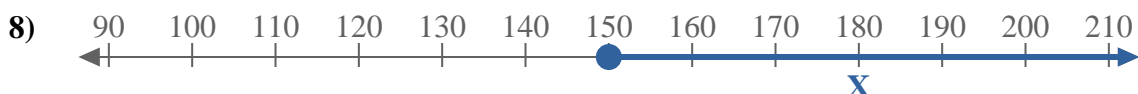
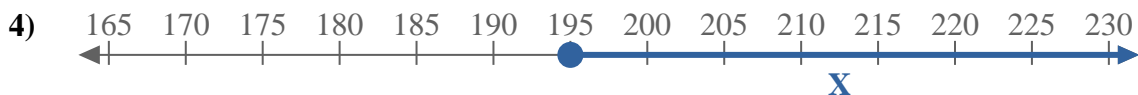
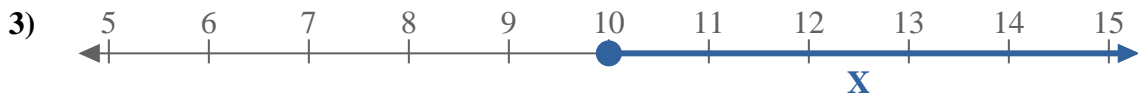
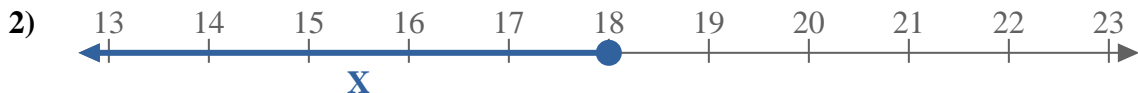
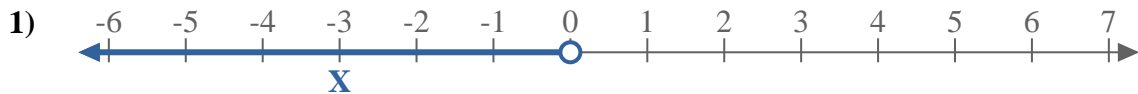
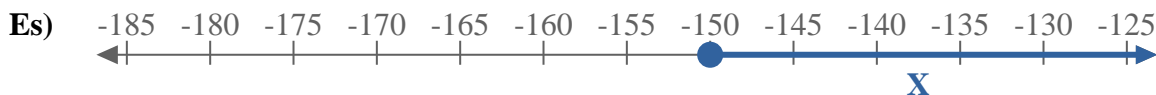
11. \_\_\_\_\_

12. \_\_\_\_\_

13. \_\_\_\_\_



Scrivi le disuguaglianze che corrispondano ad ogni linea numerata.



**Risposte**

Es.  $X \geq -150$

1.  $X < 0$

2.  $X \leq 18$

3.  $X \geq 10$

4.  $X \geq 195$

5.  $X < 10$

6.  $X \leq 130$

7.  $X \leq -8$

8.  $X \geq 150$

9.  $X < -17$

10.  $X \geq 14$

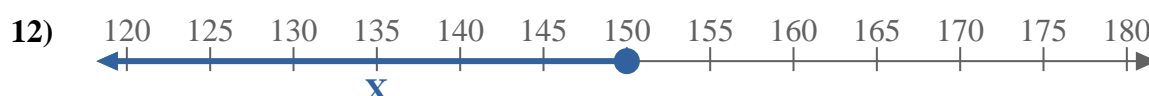
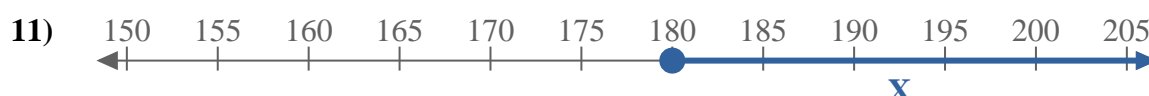
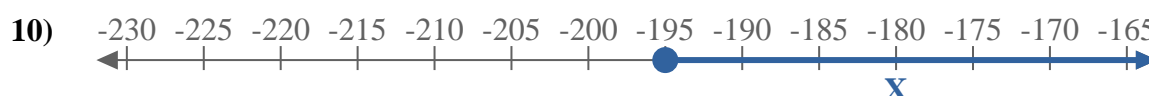
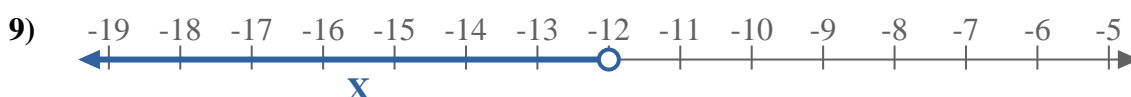
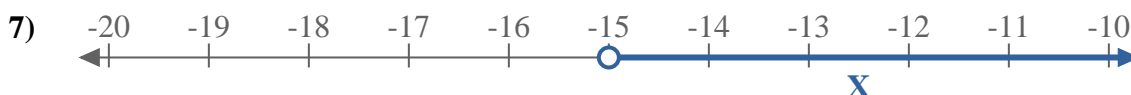
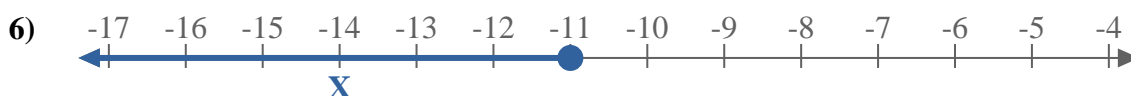
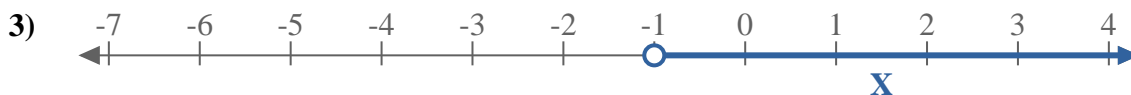
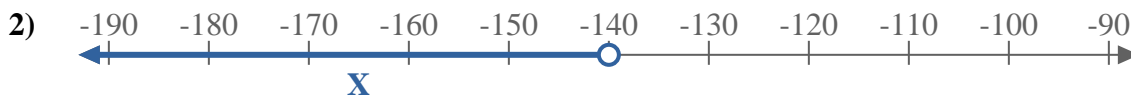
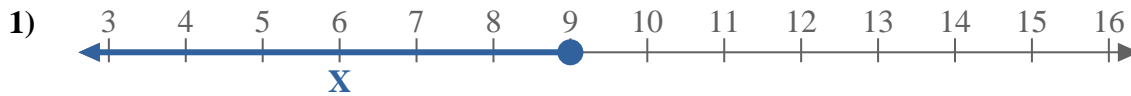
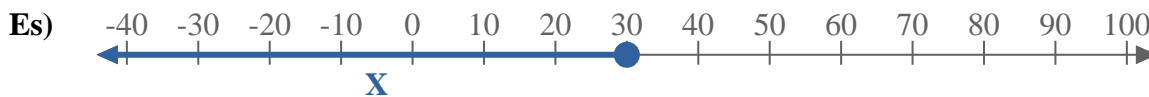
11.  $X < -8$

12.  $X \leq 180$

13.  $X > -55$



Scrivi le disuguaglianze che corrispondano ad ogni linea numerata.



**Risposte**

Es.  $X \leq 30$

1. \_\_\_\_\_

2. \_\_\_\_\_

3. \_\_\_\_\_

4. \_\_\_\_\_

5. \_\_\_\_\_

6. \_\_\_\_\_

7. \_\_\_\_\_

8. \_\_\_\_\_

9. \_\_\_\_\_

10. \_\_\_\_\_

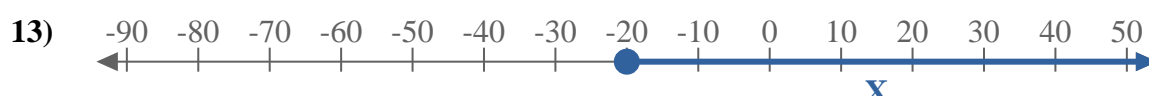
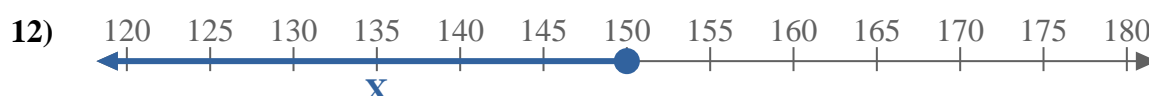
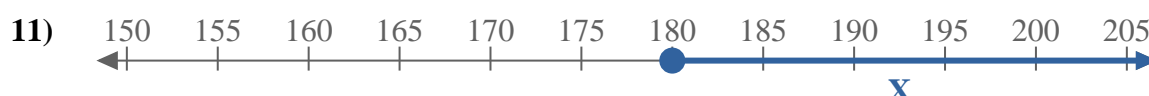
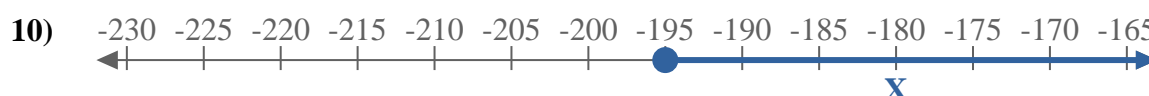
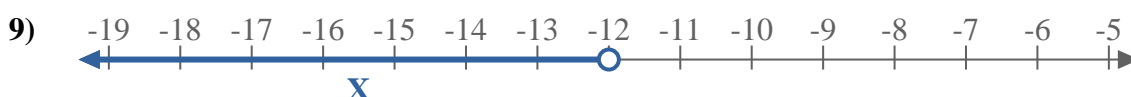
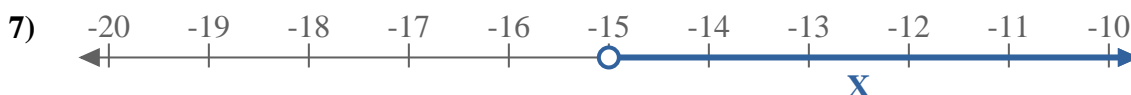
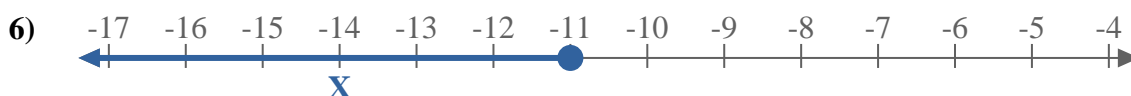
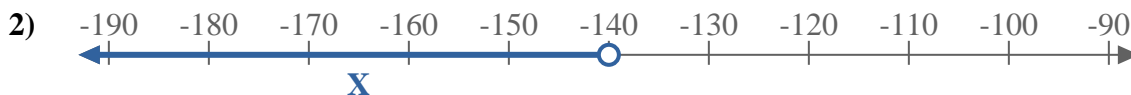
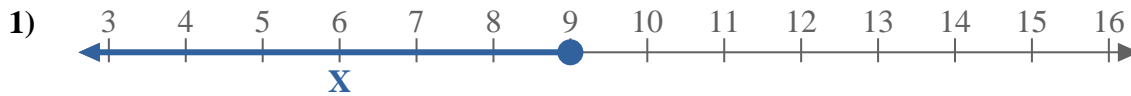
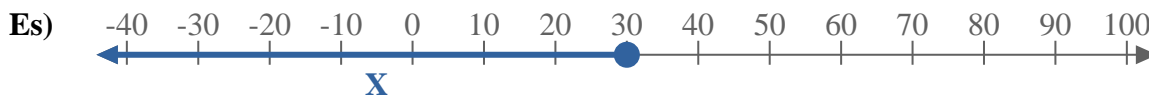
11. \_\_\_\_\_

12. \_\_\_\_\_

13. \_\_\_\_\_



Scrivi le disuguaglianze che corrispondano ad ogni linea numerata.



**Risposte**

Es.  $X \leq 30$

1.  $X \leq 9$

2.  $X < -140$

3.  $X > -1$

4.  $X > 3$

5.  $X > 11$

6.  $X \leq -11$

7.  $X > -15$

8.  $X > 5$

9.  $X < -12$

10.  $X \geq -195$

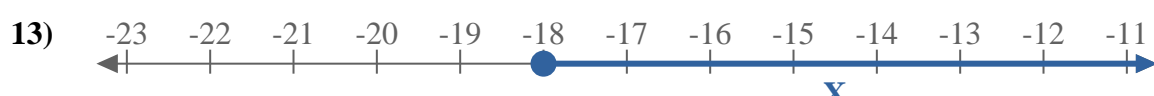
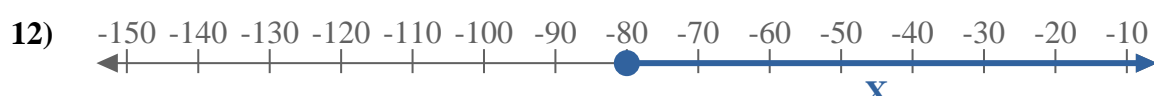
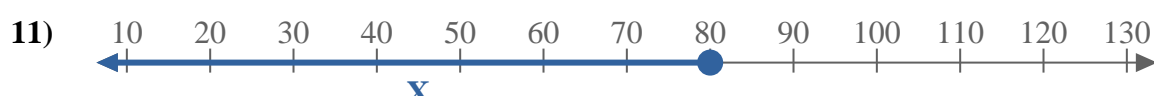
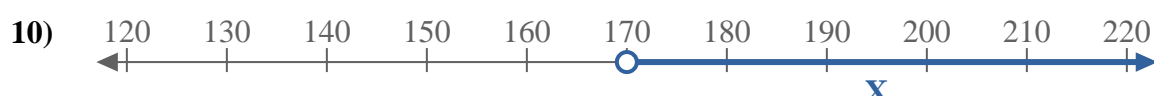
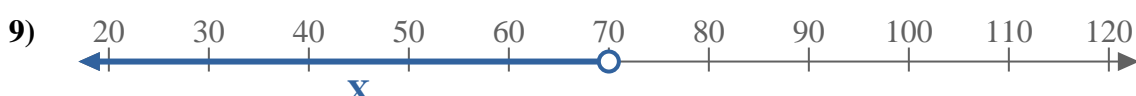
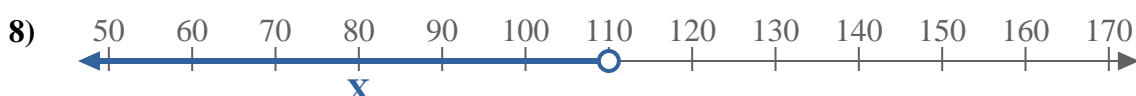
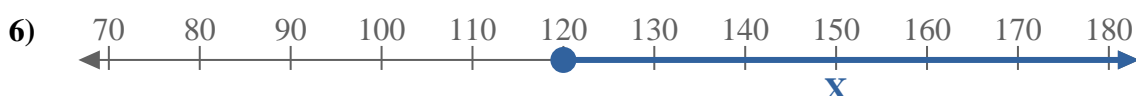
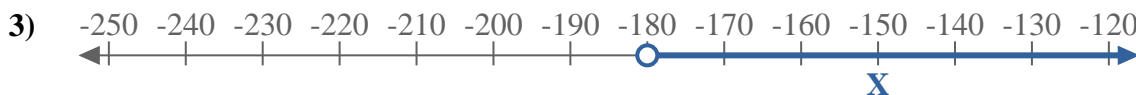
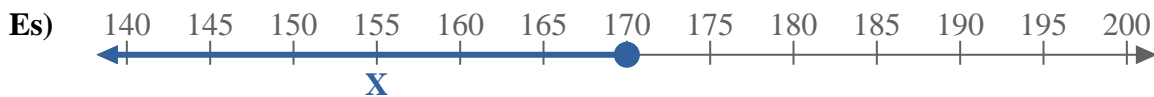
11.  $X \geq 180$

12.  $X \leq 150$

13.  $X \geq -20$



Scrivi le disuguaglianze che corrispondano ad ogni linea numerata.



**Risposte**

Es.  $X \leq 170$

1. \_\_\_\_\_

2. \_\_\_\_\_

3. \_\_\_\_\_

4. \_\_\_\_\_

5. \_\_\_\_\_

6. \_\_\_\_\_

7. \_\_\_\_\_

8. \_\_\_\_\_

9. \_\_\_\_\_

10. \_\_\_\_\_

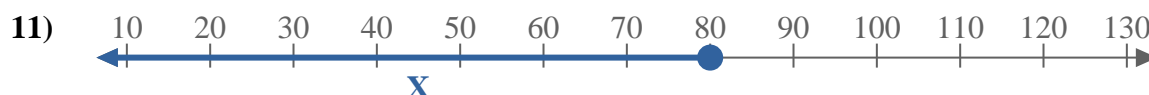
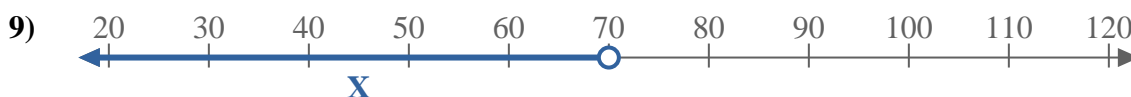
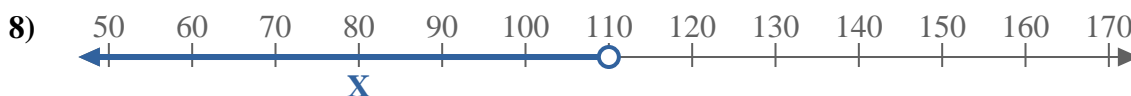
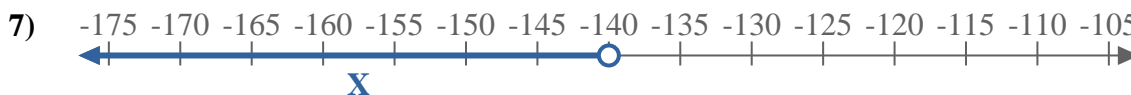
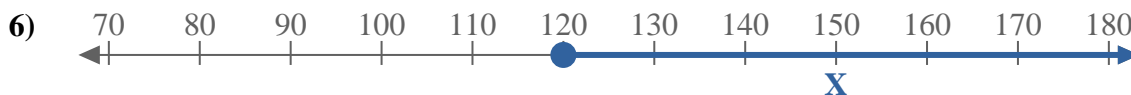
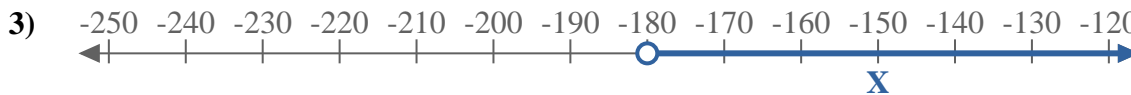
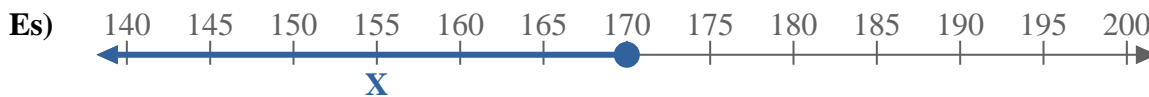
11. \_\_\_\_\_

12. \_\_\_\_\_

13. \_\_\_\_\_



Scrivi le disuguaglianze che corrispondano ad ogni linea numerata.



**Risposte**

Es.  $X \leq 170$

1.  $X \leq 2$

2.  $X \leq -75$

3.  $X > -180$

4.  $X \geq -11$

5.  $X < -110$

6.  $X \geq 120$

7.  $X < -140$

8.  $X < 110$

9.  $X < 70$

10.  $X > 170$

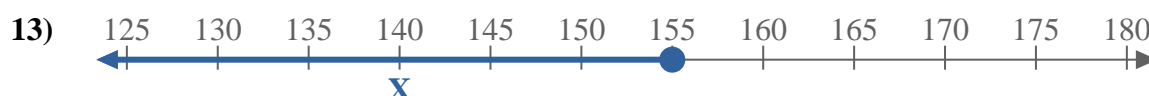
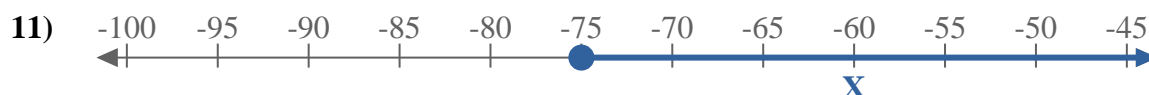
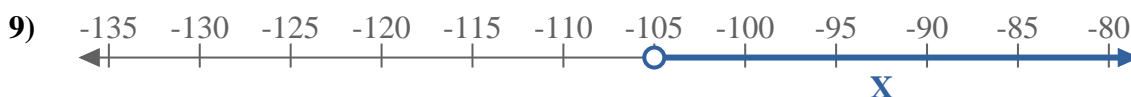
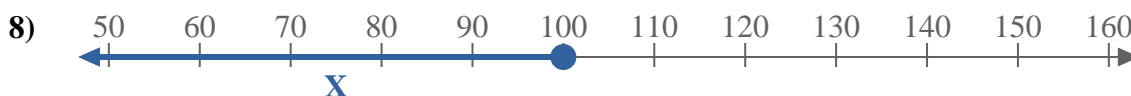
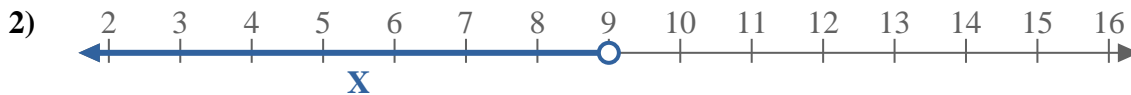
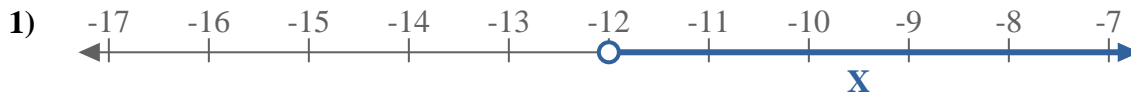
11.  $X \leq 80$

12.  $X \geq -80$

13.  $X \geq -18$



Scrivi le disuguaglianze che corrispondano ad ogni linea numerata.



**Risposte**

Es.  $X \leq 130$

1. \_\_\_\_\_

2. \_\_\_\_\_

3. \_\_\_\_\_

4. \_\_\_\_\_

5. \_\_\_\_\_

6. \_\_\_\_\_

7. \_\_\_\_\_

8. \_\_\_\_\_

9. \_\_\_\_\_

10. \_\_\_\_\_

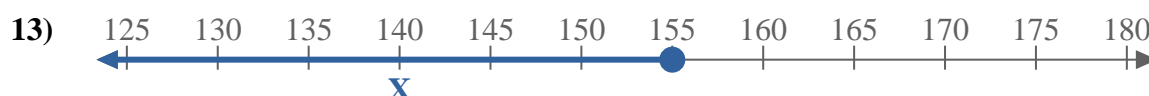
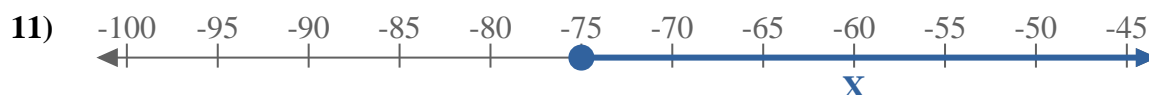
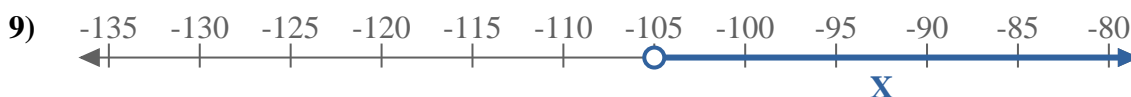
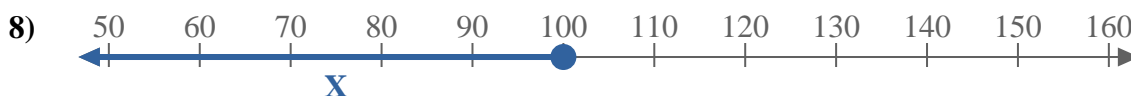
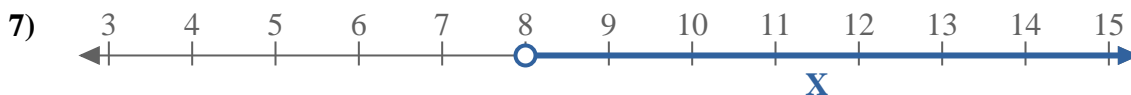
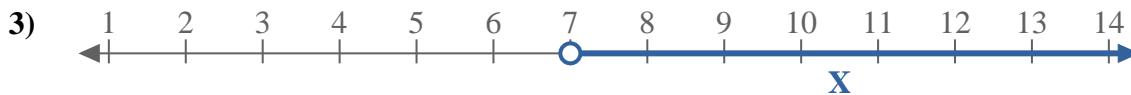
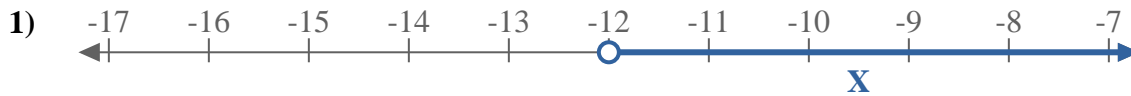
11. \_\_\_\_\_

12. \_\_\_\_\_

13. \_\_\_\_\_



Scrivi le disuguaglianze che corrispondano ad ogni linea numerata.



**Risposte**

Es.  $X \leq 130$

1.  $X > -12$

2.  $X < 9$

3.  $X > 7$

4.  $X > 4$

5.  $X < 2$

6.  $X < -1$

7.  $X > 8$

8.  $X \leq 100$

9.  $X > -105$

10.  $X \leq 9$

11.  $X \geq -75$

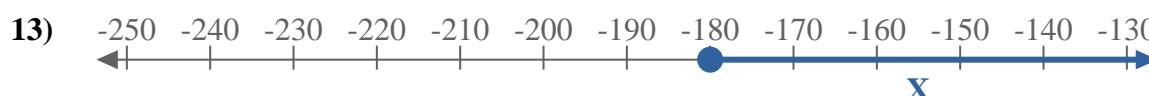
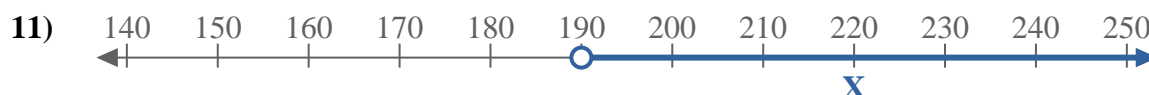
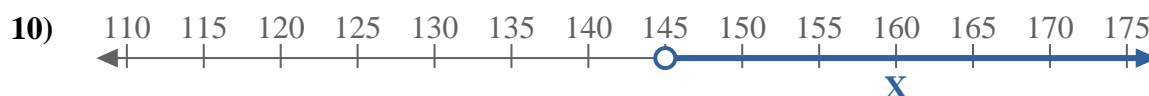
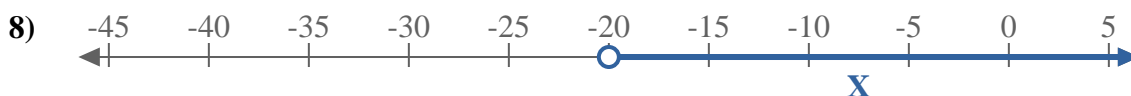
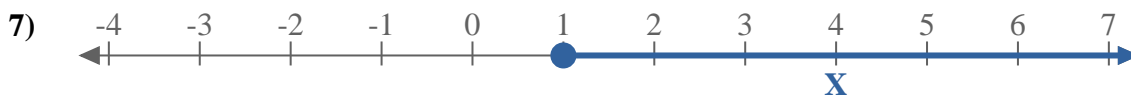
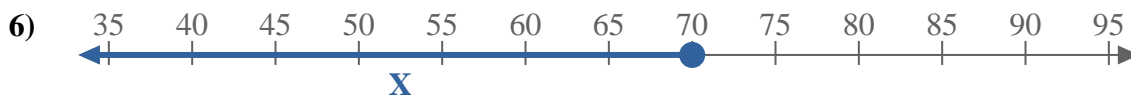
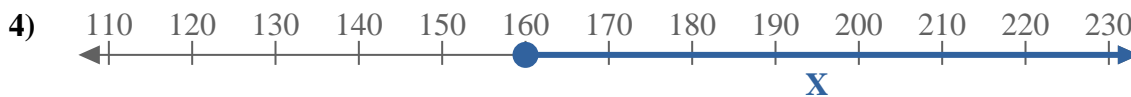
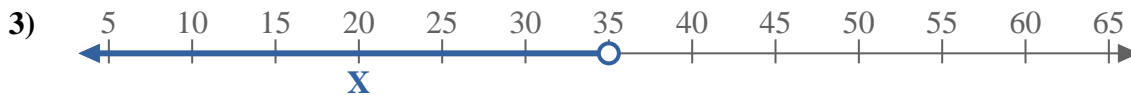
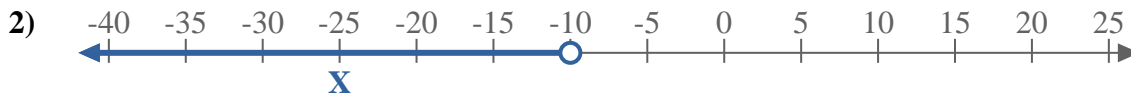
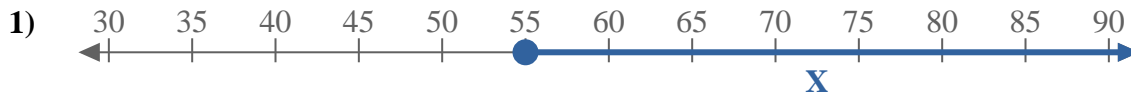
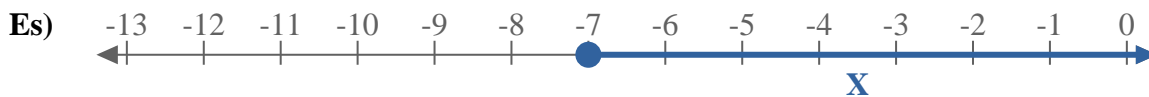
12.  $X \leq 8$

13.  $X \leq 155$





Scrivi le disuguaglianze che corrispondano ad ogni linea numerata.



**Risposte**

Es.  $X \geq -7$

1. \_\_\_\_\_

2. \_\_\_\_\_

3. \_\_\_\_\_

4. \_\_\_\_\_

5. \_\_\_\_\_

6. \_\_\_\_\_

7. \_\_\_\_\_

8. \_\_\_\_\_

9. \_\_\_\_\_

10. \_\_\_\_\_

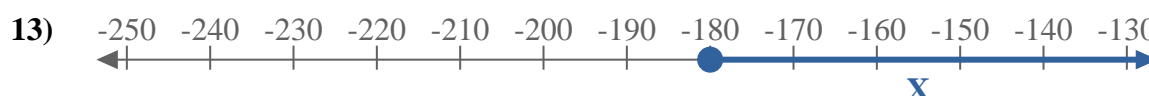
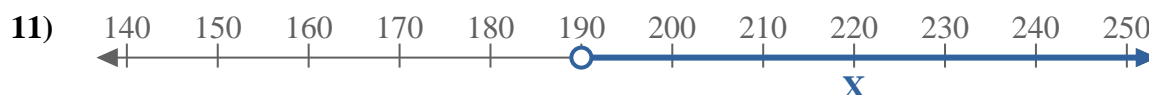
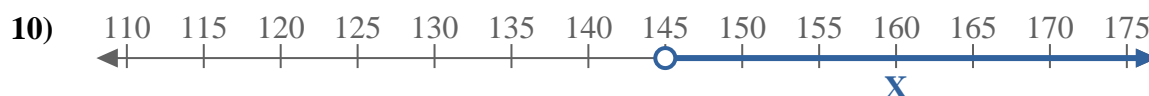
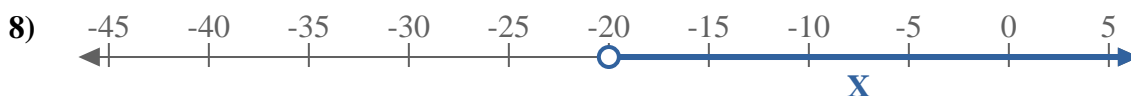
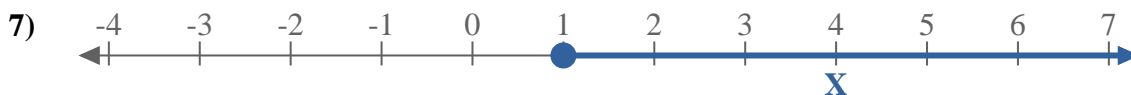
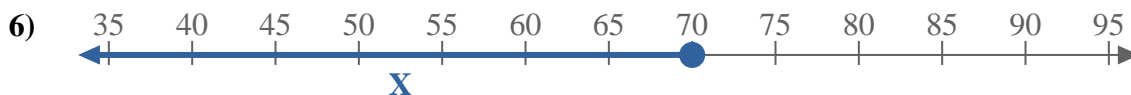
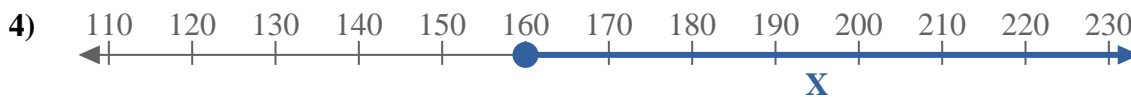
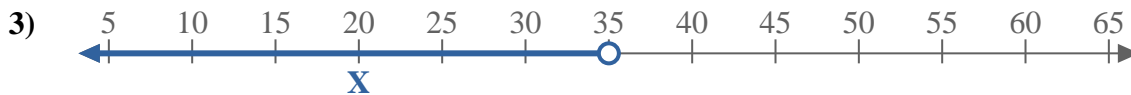
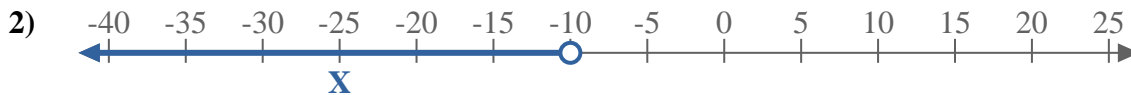
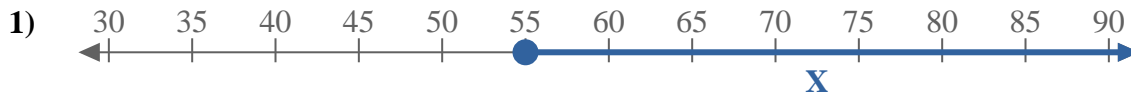
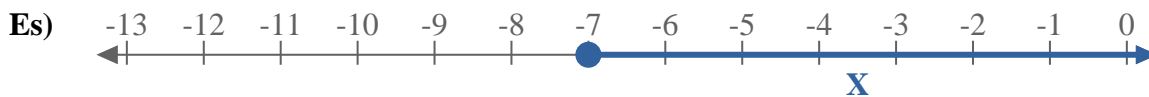
11. \_\_\_\_\_

12. \_\_\_\_\_

13. \_\_\_\_\_



Scrivi le disuguaglianze che corrispondano ad ogni linea numerata.



**Risposte**

Es.  $x \geq -7$

1.  $x \geq 55$

2.  $x < -10$

3.  $x < 35$

4.  $x \geq 160$

5.  $x \leq -70$

6.  $x \leq 70$

7.  $x \geq 1$

8.  $x > -20$

9.  $x \leq -60$

10.  $x > 145$

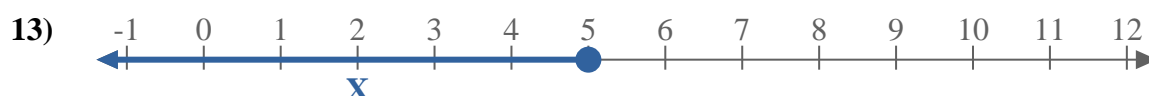
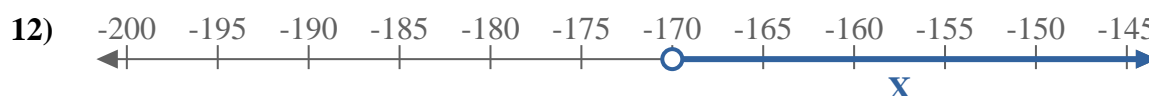
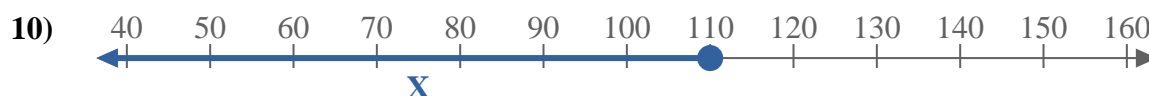
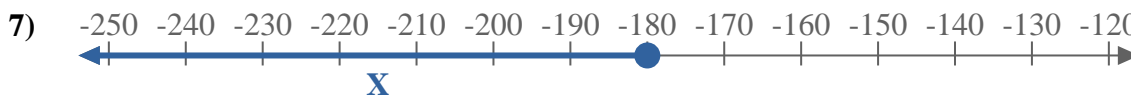
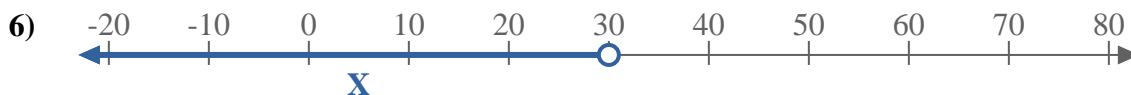
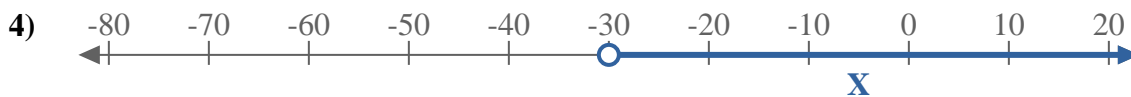
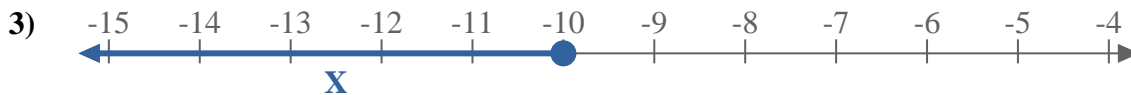
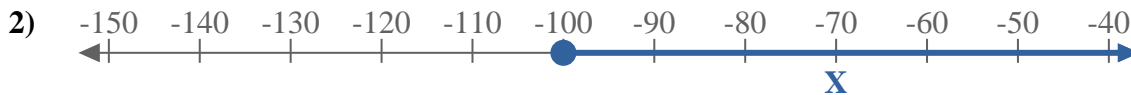
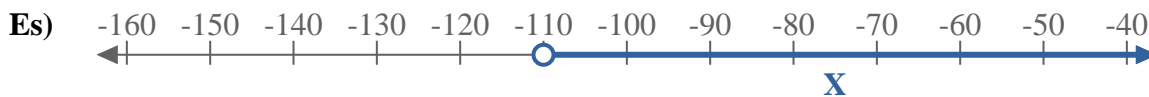
11.  $x > 190$

12.  $x < -8$

13.  $x \geq -180$



Scrivi le disuguaglianze che corrispondano ad ogni linea numerata.



**Risposte**

Es.  **$X > -110$**

1. \_\_\_\_\_

2. \_\_\_\_\_

3. \_\_\_\_\_

4. \_\_\_\_\_

5. \_\_\_\_\_

6. \_\_\_\_\_

7. \_\_\_\_\_

8. \_\_\_\_\_

9. \_\_\_\_\_

10. \_\_\_\_\_

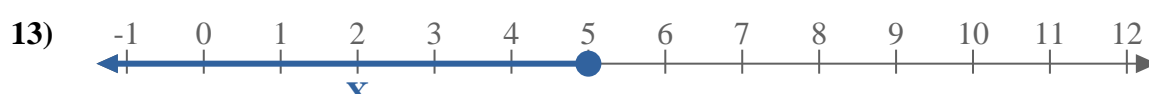
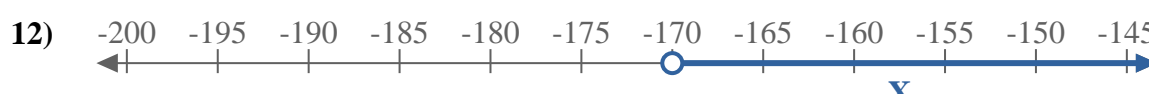
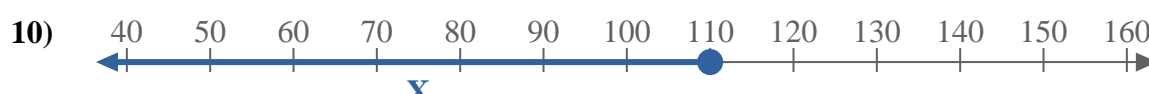
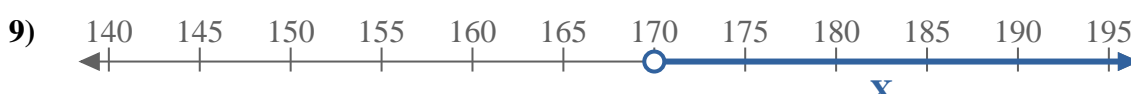
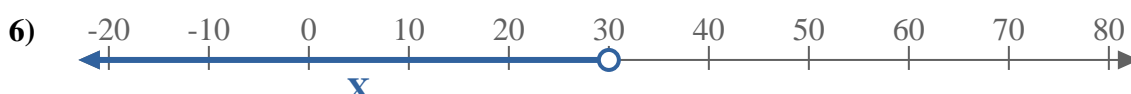
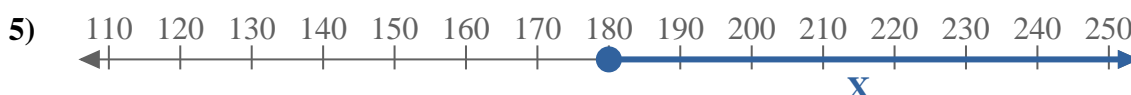
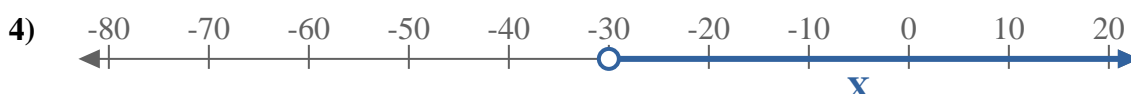
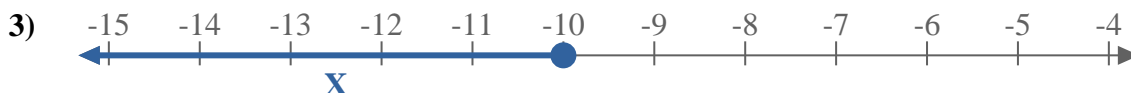
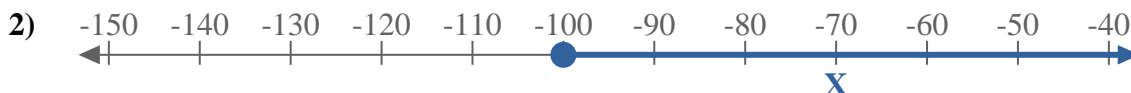
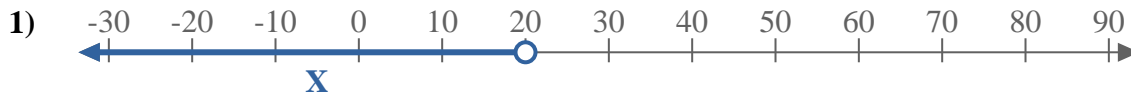
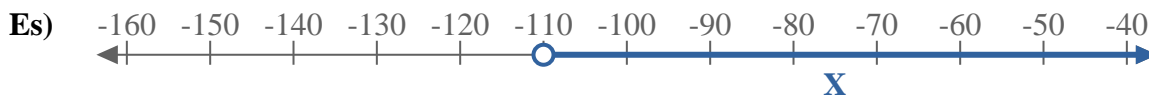
11. \_\_\_\_\_

12. \_\_\_\_\_

13. \_\_\_\_\_



Scrivi le disuguaglianze che corrispondano ad ogni linea numerata.



**Risposte**

Es.  $X > -110$

1.  $X < 20$

2.  $X \geq -100$

3.  $X \leq -10$

4.  $X > -30$

5.  $X \geq 180$

6.  $X < 30$

7.  $X \leq -180$

8.  $X < -30$

9.  $X > 170$

10.  $X \leq 110$

11.  $X < -170$

12.  $X > -170$

13.  $X \leq 5$