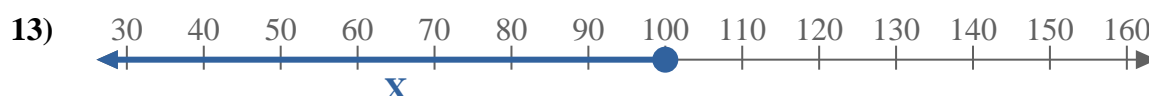
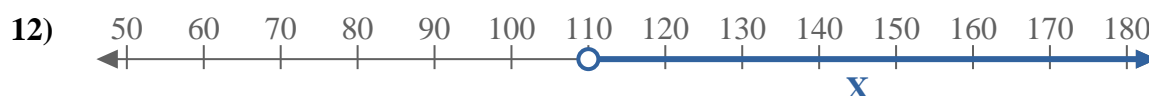
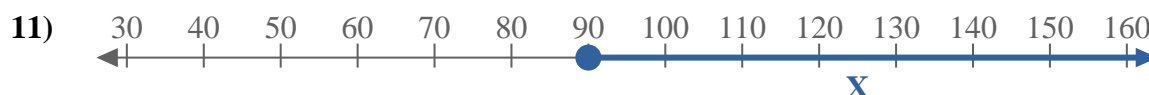
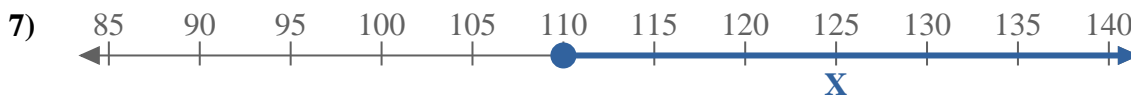
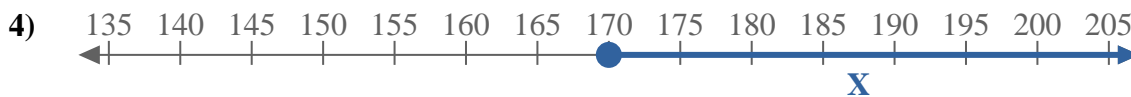
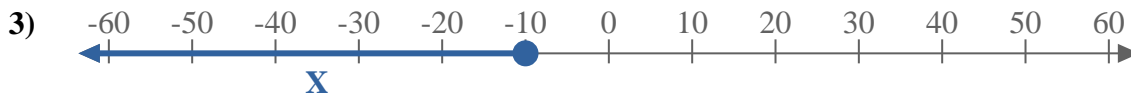
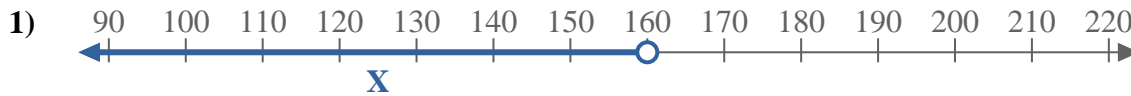
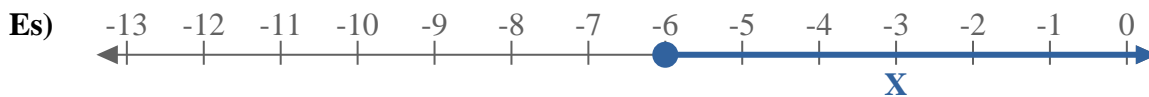




Scrivi le disuguaglianze che corrispondano ad ogni linea numerata.



**Risposte**

Es.  $X \geq -6$

1. \_\_\_\_\_

2. \_\_\_\_\_

3. \_\_\_\_\_

4. \_\_\_\_\_

5. \_\_\_\_\_

6. \_\_\_\_\_

7. \_\_\_\_\_

8. \_\_\_\_\_

9. \_\_\_\_\_

10. \_\_\_\_\_

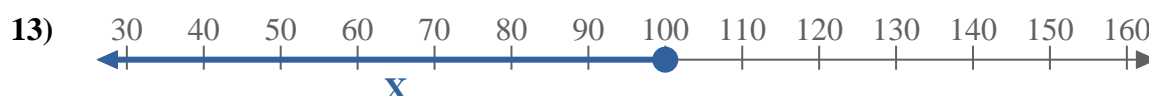
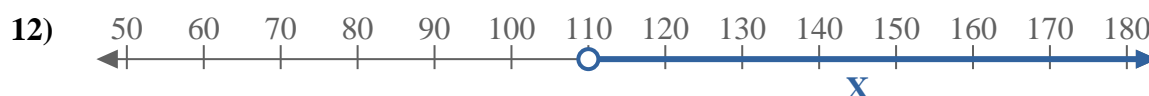
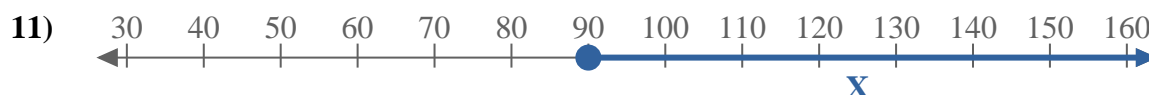
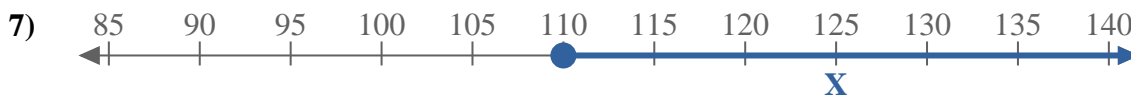
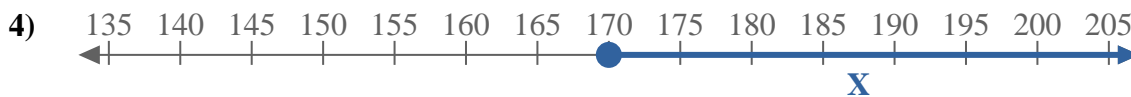
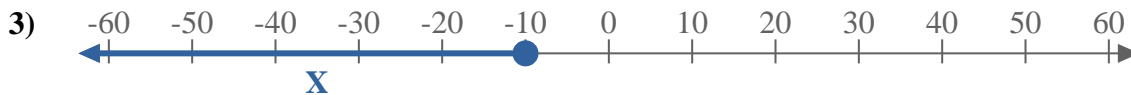
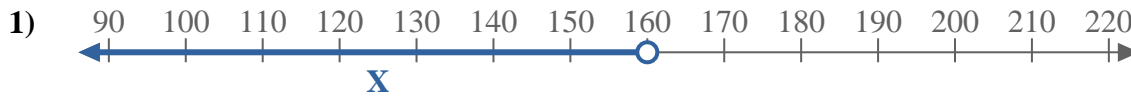
11. \_\_\_\_\_

12. \_\_\_\_\_

13. \_\_\_\_\_



Scrivi le disuguaglianze che corrispondano ad ogni linea numerata.



**Risposte**

Es.  $X \geq -6$

1.  $X < 160$

2.  $X \leq -70$

3.  $X \leq -10$

4.  $X \geq 170$

5.  $X \geq 5$

6.  $X \leq -60$

7.  $X \geq 110$

8.  $X \leq -5$

9.  $X > -40$

10.  $X \geq 5$

11.  $X \geq 90$

12.  $X > 110$

13.  $X \leq 100$