



Riempi gli spazi per trovare la quantità.

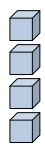
Es)

1)

2)

**Risposte**

Es. 4

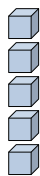


0

4

decine

unità



decine

unità



decine

unità

1. \_\_\_\_\_

2. \_\_\_\_\_

3. \_\_\_\_\_

4. \_\_\_\_\_

5. \_\_\_\_\_

6. \_\_\_\_\_

7. \_\_\_\_\_

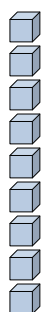
8. \_\_\_\_\_

9. \_\_\_\_\_

10. \_\_\_\_\_

11. \_\_\_\_\_

3)



decine

unità

4)



decine

unità

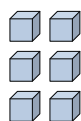
5)



decine

unità

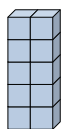
6)



decine

unità

7)



decine

unità

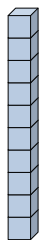
8)



decine

unità

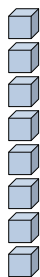
9)



decine

unità

10)



decine

unità

11)



decine

unità

