



Riempi gli spazi per trovare la quantità.

Es)

1)

2)

Risposte

Es. 4

1. _____

2. _____

3. _____

4. _____

5. _____

6. _____

7. _____

8. _____

9. _____

10. _____

11. _____



0

4

decine

unità



decine

unità



decine

unità

3)

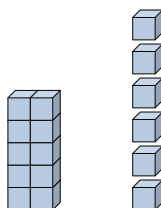
4)

5)



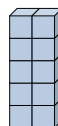
decine

unità



decine

unità



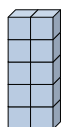
decine

unità

6)

7)

8)



decine

unità



decine

unità



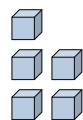
decine

unità

9)

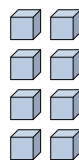
10)

11)



decine

unità



decine

unità



decine

unità

