



Riempi gli spazi per trovare la quantità.

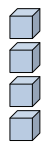
Es)

1)

2)

Risposte

Es. 4

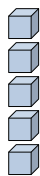


0

4

decine

unità



decine

unità



decine

unità

1. _____

2. _____

3. _____

4. _____

5. _____

6. _____

7. _____

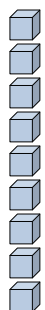
8. _____

9. _____

10. _____

11. _____

3)



decine

unità

4)



decine

unità

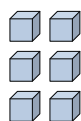
5)



decine

unità

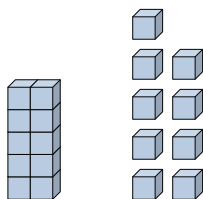
6)



decine

unità

7)



decine

unità

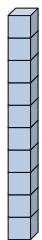
8)



decine

unità

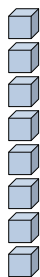
9)



decine

unità

10)



decine

unità

11)



decine

unità



Riempi gli spazi per trovare la quantità.

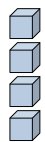
Es)

1)

2)

Risposte

Es. 4



0

4

decine

unità



decine

unità



decine

unità

3)

4)

5)

1. _____

2. _____

3. _____

4. _____

5. _____

6. _____

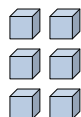
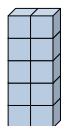
7. _____

8. _____

9. _____

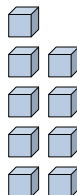
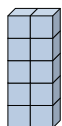
10. _____

11. _____



decine

unità



decine

unità



decine

unità

6)

7)

8)



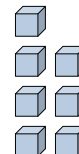
decine

unità



decine

unità



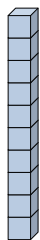
decine

unità

9)

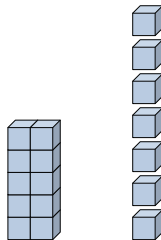
10)

11)



decine

unità



decine

unità



decine

unità

