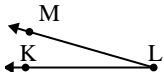




Risolvi ogni problema.

Risposte

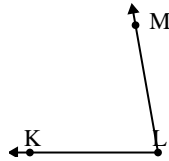
1)



Quale risposta
corrisponde a $\angle KLM$?

- A. 16°
- B. 83°
- C. 104°
- D. 131°

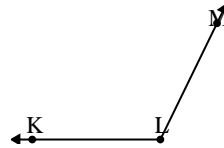
2)



Quale risposta
corrisponde a $\angle KLM$?

- A. 80°
- B. 15°
- C. 134°
- D. 102°

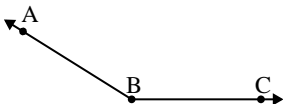
3)



Quale risposta
corrisponde a $\angle KLM$?

- A. 93°
- B. 38°
- C. 116°
- D. 11°

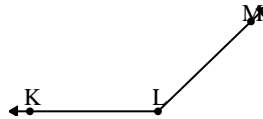
4)



Quale risposta
corrisponde a $\angle ABC$?

- A. 121°
- B. 100°
- C. 54°
- D. 148°

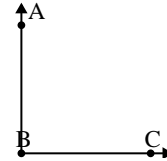
5)



Quale risposta
corrisponde a $\angle KLM$?

- A. 161°
- B. 12°
- C. 136°
- D. 95°

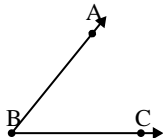
6)



Quale risposta
corrisponde a $\angle ABC$?

- A. 33°
- B. 60°
- C. 132°
- D. 90°

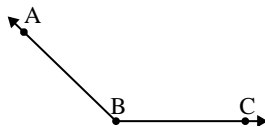
7)



Quale risposta
corrisponde a $\angle ABC$?

- A. 98°
- B. 10°
- C. 51°
- D. 136°

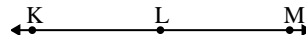
8)



Quale risposta
corrisponde a $\angle ABC$?

- A. 75°
- B. 136°
- C. 13°
- D. 49°

9)



Quale risposta
corrisponde a $\angle KLM$?

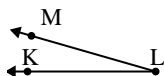
- A. 7°
- B. 157°
- C. 104°
- D. 180°

1. _____
2. _____
3. _____
4. _____
5. _____
6. _____
7. _____
8. _____
9. _____



Risolvi ogni problema.

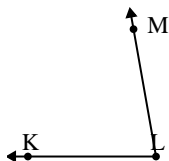
1)



Quale risposta
corrisponde a $\angle KLM$?

- A. 16°
- B. 83°
- C. 104°
- D. 131°

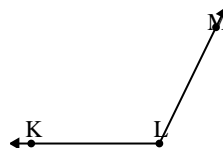
2)



Quale risposta
corrisponde a $\angle KLM$?

- A. 80°
- B. 15°
- C. 134°
- D. 102°

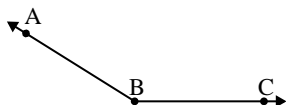
3)



Quale risposta
corrisponde a $\angle KLM$?

- A. 93°
- B. 38°
- C. 116°
- D. 11°

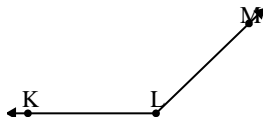
4)



Quale risposta
corrisponde a $\angle ABC$?

- A. 121°
- B. 100°
- C. 54°
- D. 148°

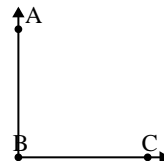
5)



Quale risposta
corrisponde a $\angle KLM$?

- A. 161°
- B. 12°
- C. 136°
- D. 95°

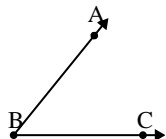
6)



Quale risposta
corrisponde a $\angle ABC$?

- A. 33°
- B. 60°
- C. 132°
- D. 90°

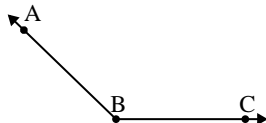
7)



Quale risposta
corrisponde a $\angle ABC$?

- A. 98°
- B. 10°
- C. 51°
- D. 136°

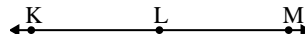
8)



Quale risposta
corrisponde a $\angle ABC$?

- A. 75°
- B. 136°
- C. 13°
- D. 49°

9)



Quale risposta
corrisponde a $\angle KLM$?

- A. 7°
- B. 157°
- C. 104°
- D. 180°

Risposte

1. **A**
2. **A**
3. **C**
4. **D**
5. **C**
6. **D**
7. **C**
8. **B**
9. **D**