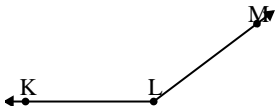




Risolvi ogni problema.

Risposte

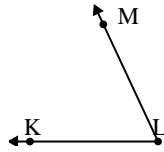
1)



Quale risposta
corrisponde a $\angle KLM$?

- A. 0°
 B. 35°
 C. 115°
 D. 143°

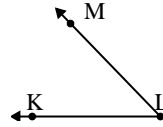
2)



Quale risposta
corrisponde a $\angle KLM$?

- A. 134°
 B. 65°
 C. 18°
 D. 44°

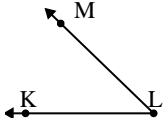
3)



Quale risposta
corrisponde a $\angle KLM$?

- A. 153°
 B. 7°
 C. 46°
 D. 78°

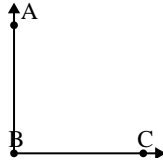
4)



Quale risposta
corrisponde a $\angle KLM$?

- A. 84°
 B. 174°
 C. 44°
 D. 136°

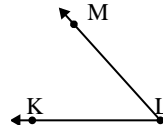
5)



Quale risposta
corrisponde a $\angle ABC$?

- A. 167°
 B. 146°
 C. 90°
 D. 23°

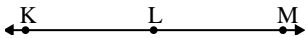
6)



Quale risposta
corrisponde a $\angle KLM$?

- A. 99°
 B. 125°
 C. 48°
 D. 69°

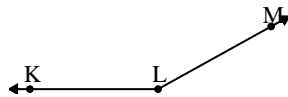
7)



Quale risposta
corrisponde a $\angle KLM$?

- A. 122°
 B. 180°
 C. 65°
 D. 153°

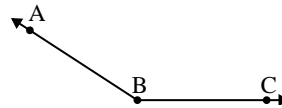
8)



Quale risposta
corrisponde a $\angle KLM$?

- A. 151°
 B. 92°
 C. 115°
 D. 27°

9)



Quale risposta
corrisponde a $\angle ABC$?

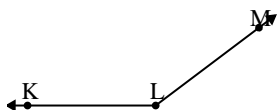
- A. 124°
 B. 89°
 C. 147°
 D. 31°

1. _____
 2. _____
 3. _____
 4. _____
 5. _____
 6. _____
 7. _____
 8. _____
 9. _____



Risolvi ogni problema.

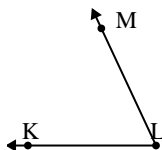
1)



Quale risposta
corrisponde a $\angle KLM$?

- A. 0°
- B. 35°
- C. 115°
- D. 143°

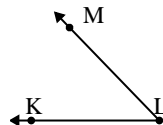
2)



Quale risposta
corrisponde a $\angle KLM$?

- A. 134°
- B. 65°
- C. 18°
- D. 44°

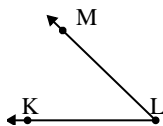
3)



Quale risposta
corrisponde a $\angle KLM$?

- A. 153°
- B. 7°
- C. 46°
- D. 78°

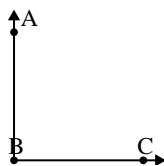
4)



Quale risposta
corrisponde a $\angle KLM$?

- A. 84°
- B. 174°
- C. 44°
- D. 136°

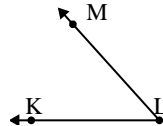
5)



Quale risposta
corrisponde a $\angle ABC$?

- A. 167°
- B. 146°
- C. 90°
- D. 23°

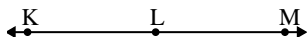
6)



Quale risposta
corrisponde a $\angle KLM$?

- A. 99°
- B. 125°
- C. 48°
- D. 69°

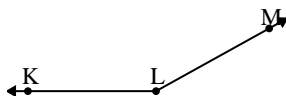
7)



Quale risposta
corrisponde a $\angle KLM$?

- A. 122°
- B. 180°
- C. 65°
- D. 153°

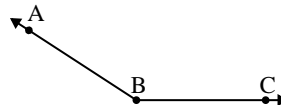
8)



Quale risposta
corrisponde a $\angle KLM$?

- A. 151°
- B. 92°
- C. 115°
- D. 27°

9)



Quale risposta
corrisponde a $\angle ABC$?

- A. 124°
- B. 89°
- C. 147°
- D. 31°

Risposte

1. **D**
2. **B**
3. **C**
4. **C**
5. **C**
6. **C**
7. **B**
8. **A**
9. **C**