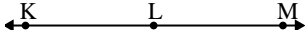




Risolvi ogni problema.

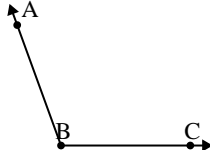
1)



Quale risposta  
corrisponde a  $\angle KLM$ ?

- A.  $180^\circ$
- B.  $115^\circ$
- C.  $1^\circ$
- D.  $24^\circ$

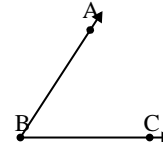
2)



Quale risposta  
corrisponde a  $\angle ABC$ ?

- A.  $7^\circ$
- B.  $164^\circ$
- C.  $110^\circ$
- D.  $60^\circ$

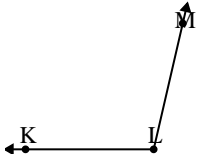
3)



Quale risposta  
corrisponde a  $\angle ABC$ ?

- A.  $162^\circ$
- B.  $99^\circ$
- C.  $57^\circ$
- D.  $3^\circ$

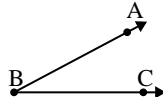
4)



Quale risposta  
corrisponde a  $\angle KLM$ ?

- A.  $103^\circ$
- B.  $42^\circ$
- C.  $82^\circ$
- D.  $13^\circ$

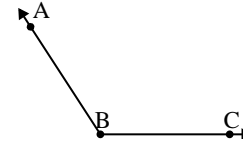
5)



Quale risposta  
corrisponde a  $\angle ABC$ ?

- A.  $102^\circ$
- B.  $147^\circ$
- C.  $28^\circ$
- D.  $80^\circ$

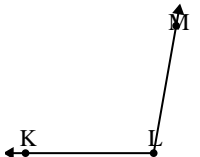
6)



Quale risposta  
corrisponde a  $\angle ABC$ ?

- A.  $123^\circ$
- B.  $91^\circ$
- C.  $151^\circ$
- D.  $19^\circ$

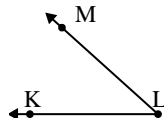
7)



Quale risposta  
corrisponde a  $\angle KLM$ ?

- A.  $75^\circ$
- B.  $134^\circ$
- C.  $100^\circ$
- D.  $15^\circ$

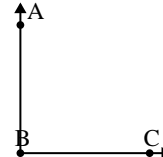
8)



Quale risposta  
corrisponde a  $\angle KLM$ ?

- A.  $21^\circ$
- B.  $42^\circ$
- C.  $149^\circ$
- D.  $68^\circ$

9)



Quale risposta  
corrisponde a  $\angle ABC$ ?

- A.  $29^\circ$
- B.  $90^\circ$
- C.  $163^\circ$
- D.  $133^\circ$

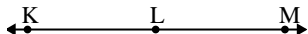
**Risposte**

1. \_\_\_\_\_
2. \_\_\_\_\_
3. \_\_\_\_\_
4. \_\_\_\_\_
5. \_\_\_\_\_
6. \_\_\_\_\_
7. \_\_\_\_\_
8. \_\_\_\_\_
9. \_\_\_\_\_



Risolvi ogni problema.

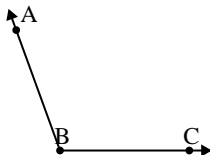
1)



Quale risposta  
corrisponde a  $\angle KLM$ ?

- A.  $180^\circ$
- B.  $115^\circ$
- C.  $1^\circ$
- D.  $24^\circ$

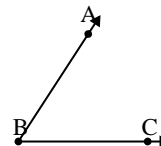
2)



Quale risposta  
corrisponde a  $\angle ABC$ ?

- A.  $7^\circ$
- B.  $164^\circ$
- C.  $110^\circ$
- D.  $60^\circ$

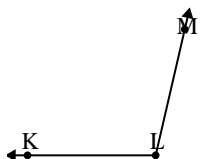
3)



Quale risposta  
corrisponde a  $\angle ABC$ ?

- A.  $162^\circ$
- B.  $99^\circ$
- C.  $57^\circ$
- D.  $3^\circ$

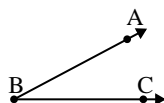
4)



Quale risposta  
corrisponde a  $\angle KLM$ ?

- A.  $103^\circ$
- B.  $42^\circ$
- C.  $82^\circ$
- D.  $13^\circ$

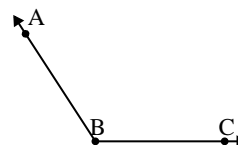
5)



Quale risposta  
corrisponde a  $\angle ABC$ ?

- A.  $102^\circ$
- B.  $147^\circ$
- C.  $28^\circ$
- D.  $80^\circ$

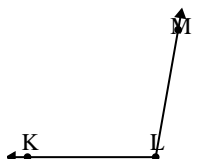
6)



Quale risposta  
corrisponde a  $\angle ABC$ ?

- A.  $123^\circ$
- B.  $91^\circ$
- C.  $151^\circ$
- D.  $19^\circ$

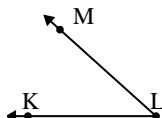
7)



Quale risposta  
corrisponde a  $\angle KLM$ ?

- A.  $75^\circ$
- B.  $134^\circ$
- C.  $100^\circ$
- D.  $15^\circ$

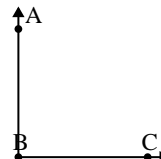
8)



Quale risposta  
corrisponde a  $\angle KLM$ ?

- A.  $21^\circ$
- B.  $42^\circ$
- C.  $149^\circ$
- D.  $68^\circ$

9)



Quale risposta  
corrisponde a  $\angle ABC$ ?

- A.  $29^\circ$
- B.  $90^\circ$
- C.  $163^\circ$
- D.  $133^\circ$

**Risposte**

1.     **A**
2.     **C**
3.     **C**
4.     **A**
5.     **C**
6.     **A**
7.     **C**
8.     **B**
9.     **B**