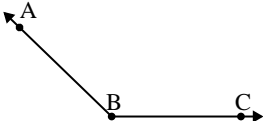




Risolvi ogni problema.

Risposte

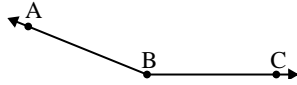
1)



Quale risposta
corrisponde a $\angle ABC$?

- A. 32°
- B. 112°
- C. 174°
- D. 136°

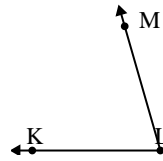
2)



Quale risposta
corrisponde a $\angle ABC$?

- A. 49°
- B. 131°
- C. 4°
- D. 158°

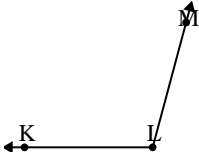
3)



Quale risposta
corrisponde a $\angle KLM$?

- A. 74°
- B. 43°
- C. 103°
- D. 3°

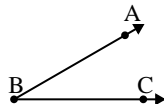
4)



Quale risposta
corrisponde a $\angle KLM$?

- A. 105°
- B. 138°
- C. 67°
- D. 42°

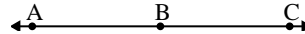
5)



Quale risposta
corrisponde a $\angle ABC$?

- A. 78°
- B. 145°
- C. 30°
- D. 1°

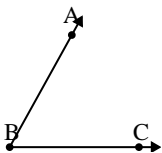
6)



Quale risposta
corrisponde a $\angle ABC$?

- A. 143°
- B. 86°
- C. 14°
- D. 180°

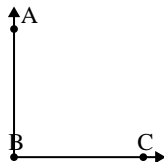
7)



Quale risposta
corrisponde a $\angle ABC$?

- A. 159°
- B. 12°
- C. 97°
- D. 61°

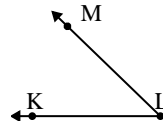
8)



Quale risposta
corrisponde a $\angle ABC$?

- A. 143°
- B. 90°
- C. 165°
- D. 2°

9)



Quale risposta
corrisponde a $\angle KLM$?

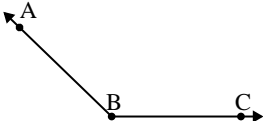
- A. 114°
- B. 23°
- C. 44°
- D. 74°

1. _____
2. _____
3. _____
4. _____
5. _____
6. _____
7. _____
8. _____
9. _____



Risolvi ogni problema.

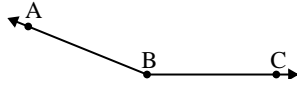
1)



Quale risposta
corrisponde a $\angle ABC$?

- A. 32°
- B. 112°
- C. 174°
- D. 136°

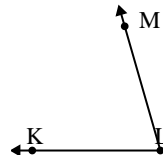
2)



Quale risposta
corrisponde a $\angle ABC$?

- A. 49°
- B. 131°
- C. 4°
- D. 158°

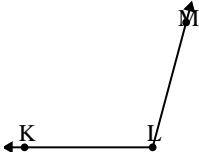
3)



Quale risposta
corrisponde a $\angle KLM$?

- A. 74°
- B. 43°
- C. 103°
- D. 3°

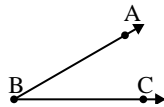
4)



Quale risposta
corrisponde a $\angle KLM$?

- A. 105°
- B. 138°
- C. 67°
- D. 42°

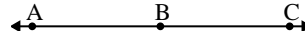
5)



Quale risposta
corrisponde a $\angle ABC$?

- A. 78°
- B. 145°
- C. 30°
- D. 1°

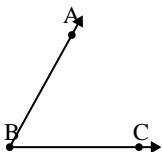
6)



Quale risposta
corrisponde a $\angle ABC$?

- A. 143°
- B. 86°
- C. 14°
- D. 180°

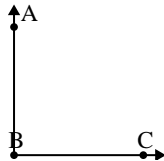
7)



Quale risposta
corrisponde a $\angle ABC$?

- A. 159°
- B. 12°
- C. 97°
- D. 61°

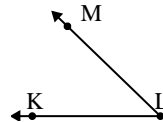
8)



Quale risposta
corrisponde a $\angle ABC$?

- A. 143°
- B. 90°
- C. 165°
- D. 2°

9)



Quale risposta
corrisponde a $\angle KLM$?

- A. 114°
- B. 23°
- C. 44°
- D. 74°

Risposte

1. **D**
2. **D**
3. **A**
4. **A**
5. **C**
6. **D**
7. **D**
8. **B**
9. **C**