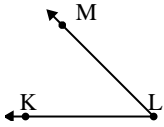




Risolvi ogni problema.

Risposte

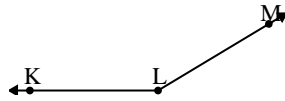
1)



Quale risposta
corrisponde a $\angle KLM$?

- A. 16°
- B. 138°
- C. 78°
- D. 45°

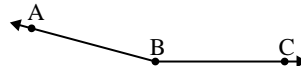
2)



Quale risposta
corrisponde a $\angle KLM$?

- A. 149°
- B. 127°
- C. 95°
- D. 1°

3)



Quale risposta
corrisponde a $\angle ABC$?

- A. 8°
- B. 38°
- C. 165°
- D. 124°

1. _____

2. _____

3. _____

4. _____

5. _____

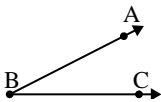
6. _____

7. _____

8. _____

9. _____

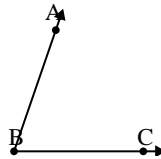
4)



Quale risposta
corrisponde a $\angle ABC$?

- A. 80°
- B. 50°
- C. 27°
- D. 136°

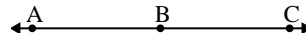
5)



Quale risposta
corrisponde a $\angle ABC$?

- A. 71°
- B. 95°
- C. 9°
- D. 33°

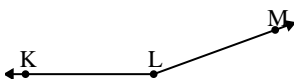
6)



Quale risposta
corrisponde a $\angle ABC$?

- A. 88°
- B. 180°
- C. 133°
- D. 18°

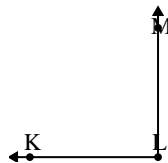
7)



Quale risposta
corrisponde a $\angle KLM$?

- A. 131°
- B. 28°
- C. 72°
- D. 160°

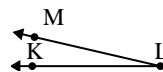
8)



Quale risposta
corrisponde a $\angle KLM$?

- A. 162°
- B. 141°
- C. 56°
- D. 90°

9)



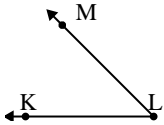
Quale risposta
corrisponde a $\angle KLM$?

- A. 44°
- B. 170°
- C. 147°
- D. 13°



Risolvi ogni problema.

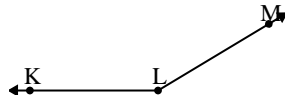
1)



Quale risposta
corrisponde a $\angle KLM$?

- A. 16°
- B. 138°
- C. 78°
- D. 45°

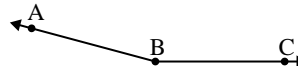
2)



Quale risposta
corrisponde a $\angle KLM$?

- A. 149°
- B. 127°
- C. 95°
- D. 1°

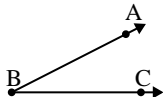
3)



Quale risposta
corrisponde a $\angle ABC$?

- A. 8°
- B. 38°
- C. 165°
- D. 124°

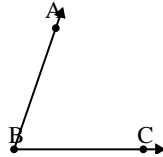
4)



Quale risposta
corrisponde a $\angle ABC$?

- A. 80°
- B. 50°
- C. 27°
- D. 136°

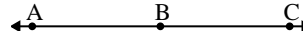
5)



Quale risposta
corrisponde a $\angle ABC$?

- A. 71°
- B. 95°
- C. 9°
- D. 33°

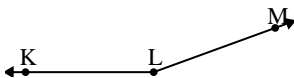
6)



Quale risposta
corrisponde a $\angle ABC$?

- A. 88°
- B. 180°
- C. 133°
- D. 18°

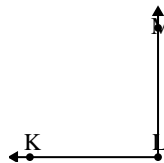
7)



Quale risposta
corrisponde a $\angle KLM$?

- A. 131°
- B. 28°
- C. 72°
- D. 160°

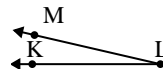
8)



Quale risposta
corrisponde a $\angle KLM$?

- A. 162°
- B. 141°
- C. 56°
- D. 90°

9)



Quale risposta
corrisponde a $\angle KLM$?

- A. 44°
- B. 170°
- C. 147°
- D. 13°

Risposte

1. **D**
2. **A**
3. **C**
4. **C**
5. **A**
6. **B**
7. **D**
8. **D**
9. **D**