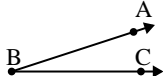




Risolvi ogni problema.

**Risposte**

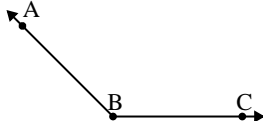
1)



Quale risposta  
corrisponde a  $\angle ABC$ ?

- A.  $91^\circ$
- B.  $18^\circ$
- C.  $173^\circ$
- D.  $133^\circ$

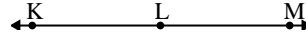
2)



Quale risposta  
corrisponde a  $\angle ABC$ ?

- A.  $157^\circ$
- B.  $37^\circ$
- C.  $135^\circ$
- D.  $7^\circ$

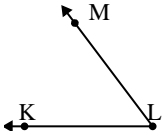
3)



Quale risposta  
corrisponde a  $\angle KLM$ ?

- A.  $57^\circ$
- B.  $180^\circ$
- C.  $12^\circ$
- D.  $158^\circ$

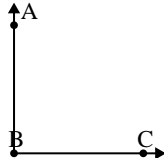
4)



Quale risposta  
corrisponde a  $\angle KLM$ ?

- A.  $147^\circ$
- B.  $13^\circ$
- C.  $53^\circ$
- D.  $170^\circ$

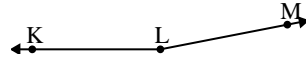
5)



Quale risposta  
corrisponde a  $\angle ABC$ ?

- A.  $90^\circ$
- B.  $114^\circ$
- C.  $50^\circ$
- D.  $4^\circ$

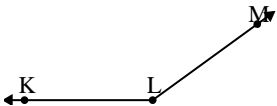
6)



Quale risposta  
corrisponde a  $\angle KLM$ ?

- A.  $107^\circ$
- B.  $169^\circ$
- C.  $11^\circ$
- D.  $39^\circ$

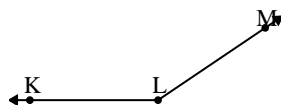
7)



Quale risposta  
corrisponde a  $\angle KLM$ ?

- A.  $144^\circ$
- B.  $38^\circ$
- C.  $104^\circ$
- D.  $2^\circ$

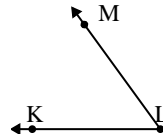
8)



Quale risposta  
corrisponde a  $\angle KLM$ ?

- A.  $86^\circ$
- B.  $40^\circ$
- C.  $146^\circ$
- D.  $173^\circ$

9)



Quale risposta  
corrisponde a  $\angle KLM$ ?

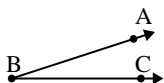
- A.  $54^\circ$
- B.  $89^\circ$
- C.  $28^\circ$
- D.  $151^\circ$

1. \_\_\_\_\_
2. \_\_\_\_\_
3. \_\_\_\_\_
4. \_\_\_\_\_
5. \_\_\_\_\_
6. \_\_\_\_\_
7. \_\_\_\_\_
8. \_\_\_\_\_
9. \_\_\_\_\_



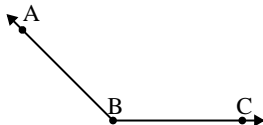
Risolvi ogni problema.

1)

Quale risposta  
corrisponde a  $\angle ABC$ ?

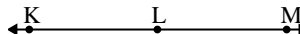
- A.  $91^\circ$
- B.  $18^\circ$
- C.  $173^\circ$
- D.  $133^\circ$

2)

Quale risposta  
corrisponde a  $\angle ABC$ ?

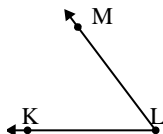
- A.  $157^\circ$
- B.  $37^\circ$
- C.  $135^\circ$
- D.  $7^\circ$

3)

Quale risposta  
corrisponde a  $\angle KLM$ ?

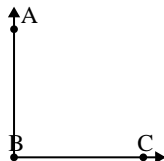
- A.  $57^\circ$
- B.  $180^\circ$
- C.  $12^\circ$
- D.  $158^\circ$

4)

Quale risposta  
corrisponde a  $\angle KLM$ ?

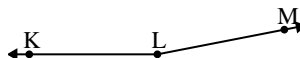
- A.  $147^\circ$
- B.  $13^\circ$
- C.  $53^\circ$
- D.  $170^\circ$

5)

Quale risposta  
corrisponde a  $\angle ABC$ ?

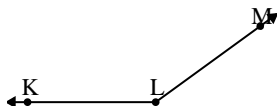
- A.  $90^\circ$
- B.  $114^\circ$
- C.  $50^\circ$
- D.  $4^\circ$

6)

Quale risposta  
corrisponde a  $\angle KLM$ ?

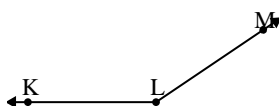
- A.  $107^\circ$
- B.  $169^\circ$
- C.  $11^\circ$
- D.  $39^\circ$

7)

Quale risposta  
corrisponde a  $\angle KLM$ ?

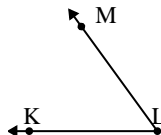
- A.  $144^\circ$
- B.  $38^\circ$
- C.  $104^\circ$
- D.  $2^\circ$

8)

Quale risposta  
corrisponde a  $\angle KLM$ ?

- A.  $86^\circ$
- B.  $40^\circ$
- C.  $146^\circ$
- D.  $173^\circ$

9)

Quale risposta  
corrisponde a  $\angle KLM$ ?

- A.  $54^\circ$
- B.  $89^\circ$
- C.  $28^\circ$
- D.  $151^\circ$

**Risposte**

1. **B**
2. **C**
3. **B**
4. **C**
5. **A**
6. **B**
7. **A**
8. **C**
9. **A**