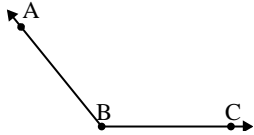




Risolvi ogni problema.

Risposte

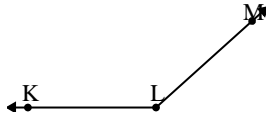
1)



Quale risposta
corrisponde a $\angle ABC$?

- A. 129°
- B. 48°
- C. 153°
- D. 175°

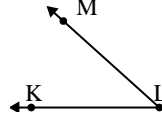
2)



Quale risposta
corrisponde a $\angle KLM$?

- A. 176°
- B. 66°
- C. 40°
- D. 138°

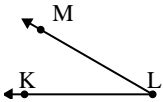
3)



Quale risposta
corrisponde a $\angle KLM$?

- A. 148°
- B. 126°
- C. 42°
- D. 94°

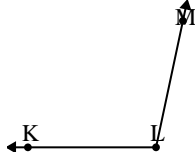
4)



Quale risposta
corrisponde a $\angle KLM$?

- A. 30°
- B. 7°
- C. 156°
- D. 66°

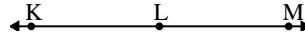
5)



Quale risposta
corrisponde a $\angle KLM$?

- A. 129°
- B. 102°
- C. 13°
- D. 56°

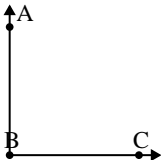
6)



Quale risposta
corrisponde a $\angle KLM$?

- A. 28°
- B. 146°
- C. 2°
- D. 180°

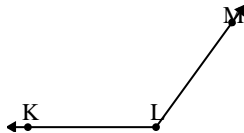
7)



Quale risposta
corrisponde a $\angle ABC$?

- A. 35°
- B. 90°
- C. 172°
- D. 62°

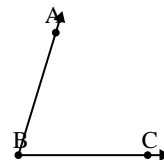
8)



Quale risposta
corrisponde a $\angle KLM$?

- A. 67°
- B. 153°
- C. 18°
- D. 126°

9)



Quale risposta
corrisponde a $\angle ABC$?

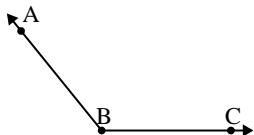
- A. 123°
- B. 42°
- C. 157°
- D. 73°

1. _____
2. _____
3. _____
4. _____
5. _____
6. _____
7. _____
8. _____
9. _____



Risolvi ogni problema.

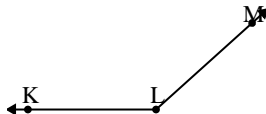
1)



Quale risposta
corrisponde a $\angle ABC$?

- A. 129°
- B. 48°
- C. 153°
- D. 175°

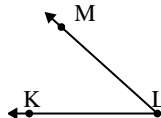
2)



Quale risposta
corrisponde a $\angle KLM$?

- A. 176°
- B. 66°
- C. 40°
- D. 138°

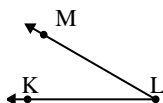
3)



Quale risposta
corrisponde a $\angle KLM$?

- A. 148°
- B. 126°
- C. 42°
- D. 94°

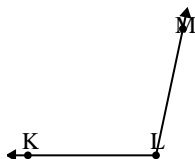
4)



Quale risposta
corrisponde a $\angle KLM$?

- A. 30°
- B. 7°
- C. 156°
- D. 66°

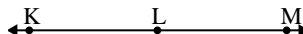
5)



Quale risposta
corrisponde a $\angle KLM$?

- A. 129°
- B. 102°
- C. 13°
- D. 56°

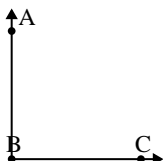
6)



Quale risposta
corrisponde a $\angle KLM$?

- A. 28°
- B. 146°
- C. 2°
- D. 180°

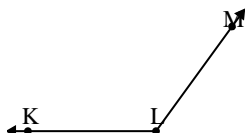
7)



Quale risposta
corrisponde a $\angle ABC$?

- A. 35°
- B. 90°
- C. 172°
- D. 62°

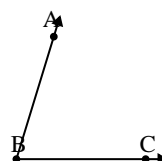
8)



Quale risposta
corrisponde a $\angle KLM$?

- A. 67°
- B. 153°
- C. 18°
- D. 126°

9)



Quale risposta
corrisponde a $\angle ABC$?

- A. 123°
- B. 42°
- C. 157°
- D. 73°

Risposte

1. **A**
2. **D**
3. **C**
4. **A**
5. **B**
6. **D**
7. **B**
8. **D**
9. **D**