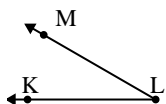




Risolvi ogni problema.

Risposte

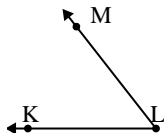
1)



Quale risposta
corrisponde a $\angle KLM$?

- A. 176°
- B. 143°
- C. 101°
- D. 30°

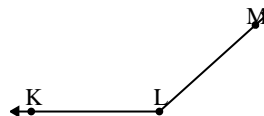
2)



Quale risposta
corrisponde a $\angle KLM$?

- A. 118°
- B. 52°
- C. 86°
- D. 9°

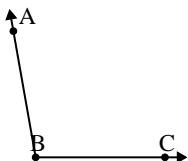
3)



Quale risposta
corrisponde a $\angle KLM$?

- A. 5°
- B. 116°
- C. 138°
- D. 79°

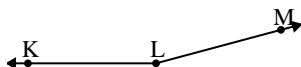
4)



Quale risposta
corrisponde a $\angle ABC$?

- A. 19°
- B. 150°
- C. 124°
- D. 100°

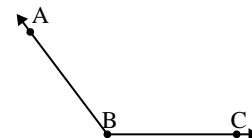
5)



Quale risposta
corrisponde a $\angle KLM$?

- A. 114°
- B. 165°
- C. 0°
- D. 66°

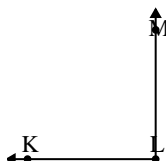
6)



Quale risposta
corrisponde a $\angle ABC$?

- A. 16°
- B. 127°
- C. 92°
- D. 151°

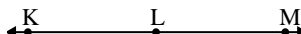
7)



Quale risposta
corrisponde a $\angle KLM$?

- A. 31°
- B. 122°
- C. 90°
- D. 6°

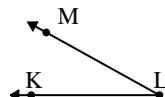
8)



Quale risposta
corrisponde a $\angle KLM$?

- A. 180°
- B. 105°
- C. 58°
- D. 130°

9)



Quale risposta
corrisponde a $\angle KLM$?

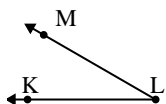
- A. 116°
- B. 178°
- C. 140°
- D. 29°

1. _____
2. _____
3. _____
4. _____
5. _____
6. _____
7. _____
8. _____
9. _____



Risolvi ogni problema.

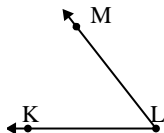
1)



Quale risposta
corrisponde a $\angle KLM$?

- A. 176°
- B. 143°
- C. 101°
- D. 30°

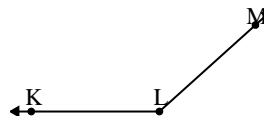
2)



Quale risposta
corrisponde a $\angle KLM$?

- A. 118°
- B. 52°
- C. 86°
- D. 9°

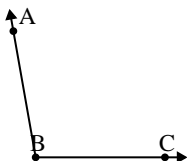
3)



Quale risposta
corrisponde a $\angle KLM$?

- A. 5°
- B. 116°
- C. 138°
- D. 79°

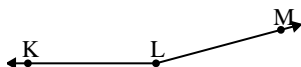
4)



Quale risposta
corrisponde a $\angle ABC$?

- A. 19°
- B. 150°
- C. 124°
- D. 100°

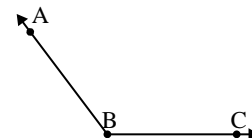
5)



Quale risposta
corrisponde a $\angle KLM$?

- A. 114°
- B. 165°
- C. 0°
- D. 66°

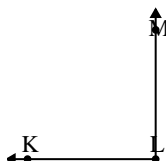
6)



Quale risposta
corrisponde a $\angle ABC$?

- A. 16°
- B. 127°
- C. 92°
- D. 151°

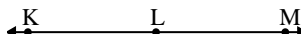
7)



Quale risposta
corrisponde a $\angle KLM$?

- A. 31°
- B. 122°
- C. 90°
- D. 6°

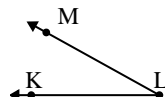
8)



Quale risposta
corrisponde a $\angle KLM$?

- A. 180°
- B. 105°
- C. 58°
- D. 130°

9)



Quale risposta
corrisponde a $\angle KLM$?

- A. 116°
- B. 178°
- C. 140°
- D. 29°

Risposte

1. **D**
2. **B**
3. **C**
4. **D**
5. **B**
6. **B**
7. **C**
8. **A**
9. **D**